

**MINISTRY OF EDUCATION, SCIENCE AND TECHNOLOGY
YEMEN ENGLISH MEDIUM PRIMARY SCHOOL
SIXTH HOLIDAY PACKAGE APRIL - 2020**

GRADE: SIX
SUBJECT: CIVIC & MORAL EDUCATION

HOME ASSIGNMENT

DURATION: 1 WEEK

DATE:

		2020
--	--	------

NAME: _____

INSTRUCTIONS TO CANDIDATES:

1. This paper consists of 50 questions
2. Read the instructions of each question carefully.
3. Write your full names on the paper given.
4. Answer all the questions according to the given instructions.
5. All answers should be written in the space provided
6. Keep your work neat.

Choose the correct answer and write it in the bracket.

1. General election in Tanzania is conducted after _____ years.
 (a) Three (b) Five (c) Two (d) One ()
2. The responsibility of parents in the family is to _____
 (a) Buy colorful clothes for their children (b) Pay school fees for their children
 (c) Discipline their children (d) Provide basic needs for their children ()
3. Social services are important because they enable _____
 (a) People to get education (b) People to live better life (c) People to get donor
 (d) People to get food ()
4. A dirty environment results in outbreak of diseases like _____.
 (a) Tetanus and cholera (b) HIV and CORONA (c) Cholera and Typhoid
 (d) Tetanus and stroke ()
5. The chairperson of a local government in an area is _____
 (a) Appointed by the District Commissioner (b) Elected by Councilors
 (c) Monitored by Members of Parliament (d) Elected by villagers ()
6. A person who loves and sacrifices for his country and is even ready to die for it is known as _____
 (a) Dictator (b) Citizen (c) Patriot (d) Resilient ()
7. The backbone of the economy of Tanzania is _____
 (a) Agriculture (b) Livestock (c) Minerals (d) Tourism ()
8. Defense and security in the family is the responsibility of _____
 (a) The father only (b) the family watchman (c) the father and mother only
 (d) all family members ()
9. The main objective of theatre arts is _____
 (a) To make people enjoy life (b) to entertain the audience (c) to educate the society
 (d) to get income ()
10. Which of the following local government leader is elected by the citizen?

 (a) Councilors (b) Ward Secretary (c) Village Executive Officer
 (d) District Councilor ()

Fill the blank spaces by writing the correct answer

11. Mention four groups of people in needs
 (a) _____ (c) _____
 (b) _____ (d) _____
12. Write four basic human rights
 (a) _____ (c) _____
 (b) _____ (d) _____

13. Mention two institutions which remain open during public holidays

(a) _____ (b) _____

14. List four Tanzania national symbols

(a) _____ (c) _____

(b) _____ (d) _____

15. Write two types of leaders

(a) _____ (b) _____

16. Write six political parties found in Tanzania

(a) _____ (d) _____

(b) _____ (e) _____

(c) _____ (f) _____

17. Mention four elements of culture (a)

_____ (c) _____

(b) _____ (d) _____

18. Write four members of Executive

(a) _____ (c) _____

(b) _____ (d) _____

19. Write two responsibilities of a Parent

(a) _____ (b) _____

20. Mention two responsibilities of a Prime Minister

(a) _____ (b) _____

Matching items

SECTION A	ANSWERS	SECTION B
21. Independence Day		A. 1 ST May
22. Krume Day		B. 7 th April
23. Nane Nane Day		C. Arusha Declaration
24. Union Day		D. 26 th April
25. Revolution Day		E. 9 th December
26. Nyerere Day		F. 12 th January
27. Workers Day		G. 14 th October
28. Sabasaba Day		H. 8 th August
29. 1995		I. First Multiparty election
30. 1967		J. 7 th July

31. How many countries are bordering Tanzania? _____

32. Draw a map of a new East African Community and show all member countries.



33. Name all countries of EAC

- (a) _____ (d) _____
(b) _____ (e) _____
(c) _____ (f) _____

34. The headquarters of EAC is at _____ in _____

Write True or False

35. Vice president is the head of Executive _____
36. The Zanzibar revolution took place on 12/1/1963 _____
37. Our parliament meets in Dodoma _____
38. Mbeya City is a constituency _____
39. BAKITA is the national Kiswahili council _____
40. In any country people use telephone to communicate _____
41. Our way of living may be expressed through arts _____

- 42. Children have no rights _____
- 43. We shall hold general election in 2020 _____
- 44. Education is one of the essential requirements for democracy. _____

Define the following terms

- 45. Political party

- 46. Multiparty system

- 47. Monopartism

- 48. Election

- 49. National symbol

- 50. Counseling

- 51. Democracy

- 52. Risky behavior

- 53. Independence

- 54. Human rights

- 55. Public holiday

56. A citizen

57. Poverty

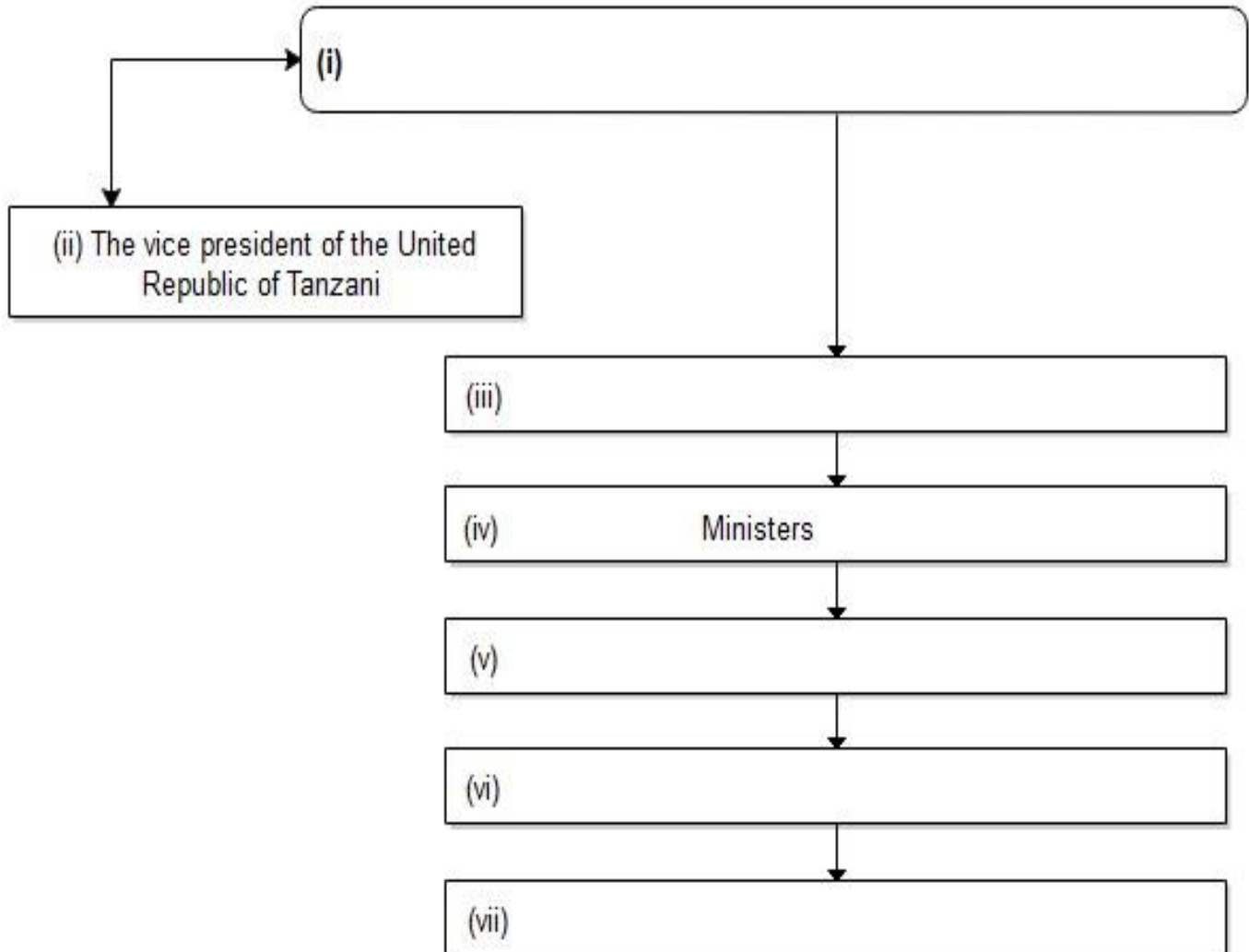
58. A nation

59. Justice

Below is the table showing Ministry and Ministers. Complete the table by writing the missing Ministry or Minister

MINISTRY	MINISTER
60. Ministry of State Regional Administration and local government	
61.	Umy Mwalimu
62. Ministry of Finance and Planning	
63. Ministry of Education, Science Technology and Vocational Training	
64.	Luhaga Mpina
65.	Dr Philip Mpango
66. Ministry of work, Transport and Communication	
67.	Innocent Bashungwa
68. Ministry of Home Affairs	
69.	Dr Hussein Mwinyi

70. Below is the structure of the government of the United Republic of Tanzania. Complete it by writing the missing organ of the government.



Write four importance of Counseling

- 71. _____
- 72. _____
- 73. _____
- 74. _____

Write five services which can be given as a priority to people in needs.

- 75. _____
- 76. _____

- 77. _____
- 78. _____
- 79. _____

Mention four ways which can be used to protect ourselves from CORONA VIRUS (COVID 19)

- 80. _____
- 81. _____
- 82. _____
- 83. _____

**MINISTRY OF EDUCATION, SCIENCE AND TECHNOLOGY
YEMEN ENGLISH MEDIUM PRIMARY SCHOOL
SIXTH HOLIDAY PACKAGE APRIL - 2020**

**GRADE: SIX
SUBJECT: ENGLISH**

**HOLIDAY
ASSIGNMENT**

DURATION: 1 WEEK

DATE:

		2020
--	--	------

NAME: _____

INSTRUCTIONS TO CANDIDATES:

1. This paper consists of more than 50 questions
2. Read the instructions of each question carefully.
3. Write your full names on the paper given.
4. Answer all the questions according to the given instructions.
5. All answers should be written in the space provided
6. Keep your work neat.

Choose the correct tense to complete the sentences below

1. My father has _____ the rope (a) cut (b) cutting (c) cutted (d) cuts []
2. They _____ from Arusha when the accident occurred (a) are travelling (b) were travelling (c) travelled (d) were travelled []
3. The old man _____ his house regularly (a) sweeping (b) sweeps (c) swept (d) sweep []
4. We _____ the clothes on the lines after washing them yesterday (a) hung (b) hunged (c) hang (d) hanged []
5. They _____ since morning (a) have been swimming (b) has been swimming (c) swimming (d) swims []
6. We never _____ to school when it was raining (a) go (b) went (c) going (d) goes []
7. The teacher who _____ us science last term is a Canadian (a) teaches (b) taught (c) teaching (d) is teaching []
8. “Who is making noise” our monitor (a) is ask (b) asking (c) asks (d) asked []
9. Do all babies _____ at night (a) cried (b) cry (c) cries (d) were crying []
10. Where did the meeting _____ place? (a) taken (b) take (c) took (d) taking []
11. Our visitors are gone, they _____ a few hours ago (a) left (b) leave (c) are leaving (d) will leave []
12. I saw a rhinoceros at the park that we had never _____ (a) see (b) seeing) (c) seen (d) saw []
13. Did Andrew _____ any oranges from the market? (a) bought (b) buy (c) buys (d) buying []
14. Maria has been _____ A novel since today morning (a) been reading (b) reading (c) be reading (d) read []

15. We never _____ to school when our mother was away (a) went (b) go (c) goes (d) going []
16. Hassan _____ in bed since _____ was sick (a) lies (b) lay (c) lain (d) laid []
17. The brave hunter _____ the fierce lion (a) slained (b) slew (c) slayed (d) slain []
18. The cheetah _____ at the zebra and killed it on the spot (a) spring (b) sprang (c) sprung (d) springed []
19. The rain season _____ early this year (a) has begin (b) has began (c) has begun (d) has begins []
20. Which hen has _____ an egg? (a) lain (b) lied (c) lay (d) laid []
21. Mohammed _____ a bee farmer (a) is (b) are (c) shall (d) will []
22. On seeing us, the monkey _____ from tree to tree (a) swung (b) swinging (c) swang (d) swing []
23. Grandfather's bull _____ him Tsh. 1,500,000/= (a) costed (b) cost (c) costing (d) cost []
24. None of us _____ required to respond to the changes (a) are (b) is (c) were (d) will []
25. Each one of you _____ to be present tomorrow (a) have (b) having (c) haven't (d) has []
26. The girl _____ herself with a razor blade (a) cutted (b) cut (c) cutting (d) cuts []
27. All the birds _____ away (a) flew (b) flown (c) flewn (d) flying []

Write the correct form of the tense of the words in the brackets in the sentences below

28. I have never _____ such a humble man for a father (see)

- 29. Since when have you _____ in Nairobi (be)
- 30. My father has _____ to London (go)
- 31. How many times has he _____ money from the house (steal)
- 32. They _____ the house before it was flooded with water (vacate)
- 33. The children _____ exam papers at this time tomorrow (write)
- 34. I _____ my usual breakfast from tomorrow (have)
- 35. We _____ on holiday next week (go)
- 36. The swimmer _____ a cross the river (swim)
- 37. He _____ all his belongings in the suitcase already (put)
- 38. The thief _____ over the fence when he saw me (jump)
- 39. Complete the following collective nouns with the correct word i) A

of magistrates/ judges

ii) A _____ of flies

iii) A _____ of lions

iv) A _____ of bananas/ keys

v) A bouquet of _____

vi) A crate of _____

vii) A board of _____

viii) A cluster of _____

ix) An army of _____

x) A troop of _____ or _____

- 40. Write the opposites of the following words i)

Victory _____

ii) Wild _____

iii) Natural _____

iv) Temporary _____

v) Fertile _____

- 41. Write the correct prepositions to complete the following sentences i)

She is suffering _____ corona virus

- ii) Her father disagrees _____ him in land crisis
- iii) According _____ your opinion we start the exams tomorrow?
- iv) His father has been a victim _____ political poisoning twice now
- v) They protested _____ the harsh new school hostel rules
- vi) Peninnah stays _____ Kinondoni_ _____ Dar es Salaam
- vii)The floods started _____ last week Friday
- viii) Julius is a fraid _____ failing the forthcoming exams
- ix) Keep _____ of this matter _____ it does not directly affect you
- x) Whom are we waiting _____ so that we start our meeting?

42. Choose the correct word from the bracket to complete the following sentences

- i) None of the boys _____ come to see me (have, has)
- ii) One of you _____ involved in this case (is, are)
- iii) The number of corona virus infections _____ increasing (is , are)
- iv) Can you please distribute all the sweets _____ pupils in the school today (among, between)
- v) Each of you _____ be asked questions (will, shall)
- vi) All of us _____ be injected with anti malaria dose (shall, will)
- vii) _____ Bag was found with stolen money? (who, whose)
- viii) If you see a dog or lion wagging _____ tail then don't panic or run away (its, it's)
- ix) Are you sure all the items are _____ (you, yours)

x) Neither Romeo nor Juliet _____ awarded yesterday (was, were)

43. Write one word for the following

i) Tea ,Coffee, Cocoa, Soda, Beer and Juice _____

ii) Aunt, Uncle, sister, Mother, brother, Cousin, father, grandmother

iii) Cups, Plates, sources, Bowls _____

iv) Cow, sheep , goat, pig _____

v) Chair, table , cupboard, desk, bench vi) _____

Meat from a cow or goat _____

vii)Goods from other countries to our country _____

viii) Many people gathered in the church for prayers

ix) A lady who is not married x) _____

A fertile place in the desert _____

44. Complete the following sentences

i) The young one of a Zebra is called _____

ii) The young one of a Pig is called _____

iii) The young one of an Elephant is called _____

iv) A female dog is known as _____

v) The male duck is known as _____

45. Complete the following sentences by writing the correct answer i) A

person who writes books is called _____

ii) A person who writes/ and or recites poems _____

iii) A woman whose husband is dead is called _____

iv) A child whose parents are dead _____

v) A place where milk is sold is called _____

vi) A person who performs operations to patients _____

vii)A person who cannot see is called _____

viii) A place where ancient things are kept for references _____

46. Write the sounds produced by the following animals i)

An elephant _____

ii) A goat _____

iii) A monkey _____

iv) A snake _____

v) A lion _____

vi) A horse _____

vii) A frog _____

viii) A donkey _____

ix) A frog _____

x) A bee _____

47. Re –write the following sentences after selecting the correct verbs

i) The baby has _____ the thermos flask (broke, broken)

ii) My mother has _____ lunch for us (cook, cooked)

iii) The children have not _____ the diagrams yet (drew, drawn)

iv) Where have you _____ now? (went , gone)

v) They have _____ their story books (chosen, choose)

JAMUHURI YA MUUNGANO WA TANZANIA
OFISI YA RAIS
MINISTRY OF EDUCATION, SCIENCE AND TECHNOLOGY
YEMEN ENGLISH MEDIUM PRIMARY SCHOOL
SIXTH HOLIDAY PACKAGE APRIL - 2020

DARASA: SITA
SOMO: KISWAHILI

KAZI YA
NYUMBANI

DURATION: 1 WEEK

DATE:

		2020
--	--	------

NAME: _____

MAELEKEZO KWA MTAHINIWA:

1. Karatasi hii ina maswali zaidi ya 50
2. Soma maelekezo ya kila swali kwa umakini.
3. Andika majina yako sahihi katika karatasi hii
4. Jibu maswali yote kulingana na maelekezo ya kila swali.
5. Majibu yote yaandikwe kwenye nafasi uliyopewa
6. Zingatia ufasi wa kazi yako.

SEHEMU A: Sarufi, Jaza nafasi iliyoachwawazi

1. Sweta langu limeshonwa na fundi mzoefu. Neno mzoefu ni aina gani ya neon?

2. Wingi wa neno Udongo ni _____
3. “Walisema wao ni watoro” Neno lililotumika kama kiwakilishi ni

4. “Mzee aliyekuja ameumia sana” Neno gani ni kielezi katika tungo hii?

5. Yeye ndiye aliyemchanganya Paulo. Neno yeye limetumika kama

6. Baba, mama, mimi na wadogo zangu tunapenda kula ugali. Sentensi hii iko katika nafsi ya ngapi? _____
7. Neno gani ni kinyume cha neno “KUMBUKA”?

8. Ukuta wa nyumba yetu umeanguka. Wingi wa sentensi hii ni upi?

9. Muunganisho wa konsonanti na irabu kwa neno moja huitwa

10. Juma anakwenda shuleni kumwona mwalimu. Neno lipi ni kielezi katika sentensi hii?
11. Andika kisawe cha neno “Karai”

12. Motto wa simba anaitwa

13. Warefu wasimame mbele ya mstari na wafupi wafuate kwa nyuma. Neno warefu limetumika kama

14. Nini kinyume cha neno polepole

15. Mtu anayejenga kwa mawe au tofali anaitwa

16. Andika neno jipya la Kiswahili kutokana na neno (TADILENIKWI)

17. Lo! “Sasa tupo katika wakati mgumu” Neno Lo! Limetumika kama aina gani ya neno? _____
18. Kinyume cha neno aghalabu ni

19. Mahindi, Maharage, Ufuta, Mihogo, Migomba, na Michungwa kwa neno moja huitwa _____
20. Mahali pale panatisha. Neno “pale” ni aina gani ya neno?

21. “Kinyonga anatembea” Ukanushi wa sentesi hii ni upi?

22. Nitakuwa nimemaliza shule wakati huo. Tungo hii ipo katika wakati gani?

23. Hali ya kuwa na fedha au mali nyingi kwa neno moja huitwaje?

24. Mwanamuziki hodari aliimba nyimbo nzuri. Katika sentensi hii kivumishi ni kipi?

25. Wingi wa sentensi “Ungo umenunuliwa” ni _____
26. Nimewahi sana lakini yeye amechelewa. Neno lakini ni aina gani ya maneno? _____
27. Wewe ni kijana mdogo. Neno “wewe” liko katika nafsi ya ngapi?

28. Neno Seng’eng’e lina Silabi ngapi?

29. “Niletee unga ili nisonge ugali” Hii ni kauli gani?

30. Mtu anayeipenda sana nchi yake na yuko tayari kuifia huitwaje?

31. Haini ni mtu gani?

32. Motto aliyezaliwa na wazazi wa mataifa mbalimbali huitwa _____
33. Herufi a, e, i, o, u kwa pamoja hujulikana kama _____
34. Amesema atatupatia pesa yetu juma lijalo. Sentensi hii ipo katika kauli gani?

35. Neno kigeugeu lina konsonanti ngapi?

36. Ashura na Amina, ni watoto watiifu. Maneno yaliyopigiwa mstari ni _____

37. Ng'ombe anayeendelea kuzaa huitwaje?

38. Neno ukarimu lipo katika aina ipi ya nomino?

39. Kinyume cha neno Ajuza ni

40. Abdallah ni kitukuu change. Je Abdallah ni motto wa nani yangu?

41. Kisawe cha neno "IRABU" ni

42. Wingi wa neno Waya ni

43. Alisema hajisikii vizuri, kauli halisi ya sentensi hii ni ipi?

44. Wakulima hulima kila mwaka, sentensi hii ipo kwenye hali gani?

45. Baba alisema niende sokoni. Kitenzi kisaidizi katika tungo hii ni

46. Mapendekezo haya ni mazuri. Kitenzi kishirikishi katika sentensi hii ni

47. "Muda mfupi atakuwa naingia ukumbini" Sentensi hii io katika wakati gani?

48. Hapendi kuzurura. Sentensi hii ipo katika nafsi ya ngapi?

49. Katika neno "wananilaumu" kiambishi kinachoonessa njeo ni

50. "Kiburi si maungwana" Neno "si" limetumika kama aina gani ya maneno?

SEHEMU B: LUGHA YA KIFASIHI

51. Nini maana ya kufa Kikondo

52. Tegua kitendawili hiki. "Nina chemchem isiyokauka"

53. "Mambo mema na mabaya hayafungamani" Ni methali ipi inasadifu hali hii?

54. Hali ya kumfanya mtu atii kila analoambiwa in maana sawa na nahau ipi?

55. Alimtumia mwanae hawala . “Hawala” ni neno lenye maana gani?

56. Matonya alikuwa na kichwa cha panzi. Msemo kichwa cha panzi una maana gani?

57. Rafiki yangu hana faragha. Maana ya hana faragha ni nini?

58. Nyumba yangu imeteketea kwa moto, Umebaki mwamba. Jibu la kitendawili hiki ni nini?

59. Malizia methali hii, Shibe mwana malevya

60. Nini maana ya nahau “Andika meza”

61. Tegua kitendawili kisemacho “Huku ng’o na huku ng’o”

62. Utatumia methali gani kumshauri mtu awe mvumilivu katika ghughuli zake na asipende njia za mkato?

63. Malizia methali ifuatayo, Penye wengi

64. Ni nahau ipi yenye maana sawa na kuwa makini?

65. Taja kitendawili ambacho jibu lake ni “Firigisi”

66. Mla nawe hali nawe ila

67. Vita ya panzi

68. Nini maana ya nahau Tia chumvi?

69. Kamilisha methali hii “ Maji ukiyavulia sharti uyaoge”

70. Nahau isemayo shika usukani maana yake ni ipi?

SEHEMU C: UTUNGAJI

Andika vipengele sita vya mwanzoni kwa mtiririko mzuri unaofaa katika uandishi wa barua rasmi.

71. _____
72. _____
73. _____
74. _____
75. _____
76. _____

Andikka Tofauti tano kati ya barua rasmi na barua ya kirafiki

77. _____
78. _____
79. _____
80. _____
81. _____

Taja mambo matano ya kuzingatia unapoandika lugha ya maneno

82. _____
83. _____
84. _____
85. _____
86. _____

Panga sentensi zifuatazo kwa mtiririko mzuri kwa kuzipa herufi A, B, C, D, na E.

87. Wanyama ni urithi mkubwa wa nchi.
88. Wanapokuja nchi yetu hupata fedha nyingi.
89. Watalii hutoka kwao mbali kuja kuwaona wanyama wetu.
90. Nchi yetu in hazina kubwa ya wanyama kuliko nchi nyinge zote duniani.
91. Serikali yetu inapiga vita uwindaji haramu ambao huwaua wanyama wetu.

SEHEMU D: MSAMIATI

92. Mtu anayetetea watu mahakamani anaitwaje?

93. Kisui ni motto wa

94. Nokoa ni

95. Mlinzi wa mlangoni anaitwa nani?

96. Kibwangala ni

97. Kizimbani ni sehemu gani?

98. Saladi ni nini?

99. Nini maana ya kuengua?

100. Ng'ombe dume aliyehasiwa ambaye hutumika kufanya kazi kama vile kuvutia
mkokoteni au plau huitwa? _____

**MINISTRY OF EDUCATION, SCIENCE AND TECHNOLOGY
YEMEN ENGLISH MEDIUM PRIMARY SCHOOL
SIXTH HOLIDAY PACKAGE APRIL - 2020**

**GRADE: SIX
SUBJECT: MATHEMATICS**

**HOLIDAY
ASSIGNMENT**

DURATION: 1 WEEK

DATE:

		2020
--	--	------

NAME: _____

INSTRUCTIONS TO CANDIDATES:

1. This paper consists of more than 50 questions
2. Read the instructions of each question carefully.
3. Write your full names on the paper given.
4. Answer all the questions according to the given instructions.
5. All answers should be written in the space provided
6. Keep your work neat.


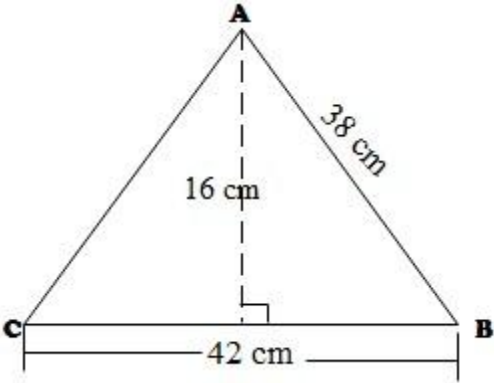
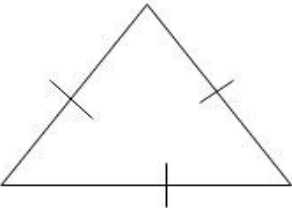
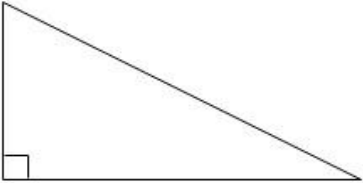
S/n	QUESTIONS	ANSWERS
1.	$5699+3469=$	
2.	$476+7676=$	
3.	$2345-446=$	
4.	$90109-9999=$	
5.	$367 \times 94 =$	
6.	$854 \times 56 =$	
7.	$5850 \div 90 =$	
8.	$7008 \div 73 =$	
9.	$3.065+13.75=$	
10.	$5.9+3.698=$	
11.	$2.096-1.78=$	
12.	$3.19-2.678=$	
13.	$0.075 \div 0.15 =$	
14.	$0.357 \div 0.17 =$	
15.	$2.63 \times 2.4 =$	
16.	$0.423 \times 15 =$	
17.	$3\frac{4}{9} + 2\frac{3}{4} =$	

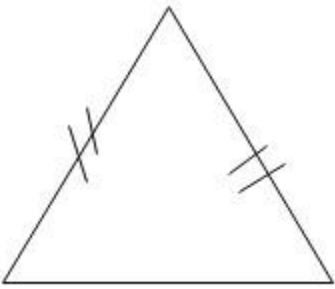
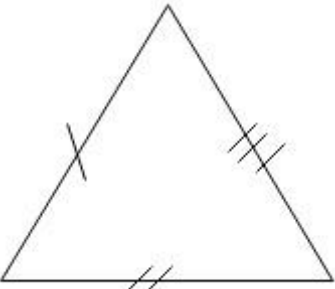
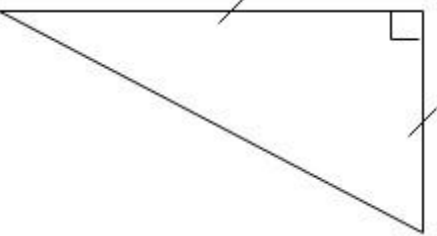
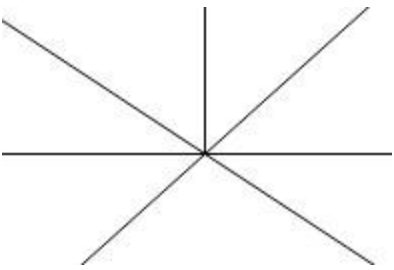
18.	$2\frac{3}{8} + 7\frac{2}{5} =$	
19.	$4\frac{1}{2} + 3\frac{1}{4} =$	
20.	$12\frac{1}{4} - 10\frac{1}{2} =$	
21.	$1\frac{1}{2} \times 2\frac{2}{3} =$	
22.	$\frac{3}{6} \times \frac{1}{6} =$	
23.	$2\frac{1}{4} \div 1\frac{4}{5} =$	
24.	$5 \div 2\frac{1}{2} =$	
25.	Convert $2\frac{3}{4}$ to decimal	
26.	Convert $6\frac{4}{5}\%$ to decimal	
27.	Change 2.4% into fraction	
28.	Change 4% into simple fraction	
29.	Change $17\frac{1}{2}\%$ into fraction	
30.	Convert 0.35 to percentage	
31.	Change $1\frac{3}{5}$ into percentage	

32.	Write down all the prime numbers found between 26 and 35	
33.	How many prime numbers are there between 20 and 45?	
34.	Write the total of the prime numbers located between 64 and 84	
35.	List down all even numbers found between 20 and 35 which are also divided by 4	
36.	Write all even numbers between 96 and 110	
37.	Find the sum of all prime numbers located between 20 and 30	
38.	Add up all odd numbers found between 82 and 90	
39.	Write down the first five odd numbers	
40.	Find the Lowest Common Multiple (LCM) of 42, 63 and 84	
41.	Find the Greatest Common Multiples of 34, 51 and 85	

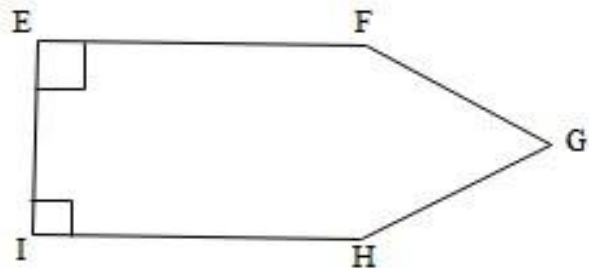
42.	Divide the LCM of 20, 24 and 36 by its GCF	
43.	Calculate the square of 107	
44.	Find the square of 81	
45.	Find the square root of 2116	
46.	Work out $\sqrt{3481}$	
47.	Compute $\sqrt{144} + \sqrt{16^2}$	
48.	Find the next number in the following series 0, 3, 8, 15, 24, _____	
49.	Write the missing number in the progression 1, 4, 9, _____, 25	
50.	Write 492 in the Roman numerals	
51.	Write XCIX in normal numbers	
52.	Convert DCCXCV into Arabic numeral	
53.	Evaluate CL–CX write your answer in ordinary numeral	
54.	Write 609 in Roman numbers	
55.	2 hours 30 minutes divide by 10	
56.	Multiply 27kg 590gm by 12	

57.	Find the value of x if $3x - 4 = 11$	
58.	Write 'Twice a number decreased by three is twenty four' as an algebraic equation	
59.	Simplify $\frac{55xw^2h}{11xwh}$	
60.	Work out $10y + 4x + 3y + 9y + 9x$	
61.	A triangular plot has a height of 21m a base of 24m and a hypotenuse of 31m. Find its area.	
62.	Find the base of a right angled triangle which has an area of 108cm^2 and height of 18cm	
63.	The area of a triangular r farm is 40 km^2 , if the height of the farm is 5km and the hypotenuse is 12km what is the base of the farm?	
64.	An isosceles triangle has a height of 20cm and its area is 100cm^2 . Find its perimeter	

65.	A square figure has an area of 256cm^2 . What is its length?	
66.	A square measures 27cm by 27cm . find its area	
67.	Find the value of w in the figure. 	
68.	Find the area of a triangle ABC 	
Name the following given types of triangles below		
69.		
70.		

71.		
72.		
73.		
74.	<p>How many angles are there?</p> 	
75.	<p>How many symmetrical lines are there in a circle?</p>	
76.	<p>How many symmetrical lines are in an isosceles triangle?</p>	


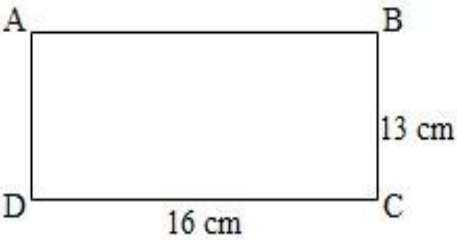
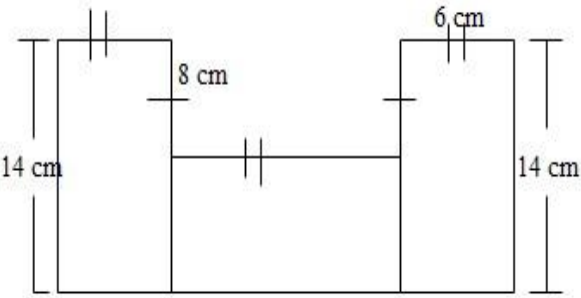
Study the following figure and then answer the question below.

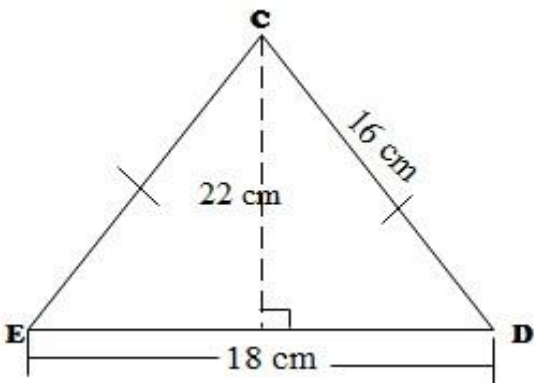



- 77. What type of angle is $\angle FGH$
- 78. What type of angle are $\angle EFG$ and $\angle GHI$
- 79. Name all the right angles
- 80. Name the acute angle shown
- 81. How many obtuse angles are there?

Name the angles given below

- 82.
- 83.
- 84.
- 85.

86.		
87.	<p>A man stayed in a prison for 1095 months. How many years did he stay in the prison?</p>	
88.	<p>0.85 of sugarcane is rotten. What size of the sugar can is not rotten?</p>	
89.	<p>What is the difference between 92.85 and 3.85</p>	
90.	<p>What is the difference between $4\frac{3}{6}$ and $6\frac{6}{9}$</p>	
91.	<p>Find the area of the rectangle ABCD</p> 	
92.	<p>Find the perimeter of the figure below</p> 	

93.	<p>Find the perimeter of a triangle CDE</p> 	
94.	<p>Find the area of the figure below</p> 	
95.	<p>Twenty four bags of maize were arranged in twelve rows. How many bags were in the row?</p>	
96.	<p>What is 284 divided by 71</p>	
97.	<p>In a forest 864 trees are indigenous. If the trees has been planted in 36 rows, how many trees are in a row?</p>	
98.	<p>Convert 16 hours 13 minutes to minutes.</p>	

99.	Flaviana took 1 hour 40 minutes to go to the market. She took 1 hour 25 minutes to come back home. How long was she away from home?	
100.	Katana bought 4 exercise books at 2500/= each, 5 rules at 500/= each, 100/= for fare go and returned. How many money did he spend altogether?	

**MINISTRY OF EDUCATION, SCIENCE AND TECHNOLOGY
YEMEN ENGLISH MEDIUM PRIMARY SCHOOL
SIXTH HOLIDAY PACKAGE APRIL - 2020**

GRADE: SIX

SUBJECT: SCIENCE AND TECHNOLOGY

HOME ASSIGNMENT

DURATION: 1 WEEK

DATE:

		2020
--	--	------

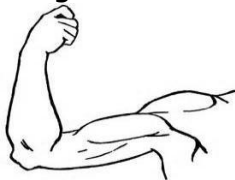
NAME: _____

INSTRUCTIONS TO CANDIDATES:

1. This paper consists of 50 questions
2. Read the instructions of each question carefully.
3. Write your full names on the paper given.
4. Answer all the questions according to the given instructions.
5. All answers should be written in the space provided
6. Keep your work neat.

SECTION A. MULTIPLE CHOICE QUESTIONS**Choose the most correct answer and write its letter in the brackets provided:**

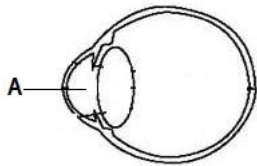
1. Which of the following parts protect the young flower when it is in a bud before blooming?
(A). Petal (C). Sepal (E). Ovary []
(B). Stalk (D). Stigma
2. Transportation of food in plants is referred to as:
(A). Respiration (C). Hydrotropism (E). Transpiration []
(B). Osmosis (D). Translocation
3. The following are parts of a leaf, **EXCEPT**:
(A). lamina (C). main vein (E). petiole []
(B). apex (D). petal
4. Why is a spider **NOT** a true insect?
(A). It does not lay eggs (C). It forms a web (E). It has six legs []
(B). It has four legs (D). It has two body parts
5. A machine lifted a load of 80N using an effort of 40 N. What will be its Mechanical Advantage (MA)?
(A). 50 (C). 100 (E). 2 []
(B). 0.5 (D). 40
6. A copy or picture of an object formed by plane mirror is called:
(A). image (C). concave mirror (E). plane mirror []
(B). incidence photo (D). convex mirror
7. Which one among the following is the first step in writing a scientific report?
(A). Conclusion (C). Methods (E). Materials []
(B). Results (D). Aim
8. What is the international standard unit (SI) of weight?
(A). Joule (C). Kilogram (E). Millimeters []
(B). Newton (D). Watt
9. Which of the following can demagnetize a magnet?
(A). Hanging it North-South direction (D). Heating and hammering it []
(B). Using it in dynamo (E). Using it in radio speaker
(C). Putting it in water
10. The transfer of heat in gases is called:
(A). Conduction (C). Convection (E). Evaporation []
(B). Radiation (D). Diffusion
11. The larva stage of a butterfly is called:
(A). Maggot (C). Caterpillar (E). Tadpole []
(B). Wringer (D). Nymph
12. The diagram below shows a human arm. In which class of lever does it belong?
(A) First (D). Second []
(B). Third (E). Fourth



13. A gas obtained by mixing water, methane, carbon dioxide and animal excreta is called:
(A). Oxygen (C). Biogas (E). Songas []
(B). Humus (D). Nitrogen
14. Which instrument is used to measure the amount of water vapour in the atmosphere?
(A). Barometer (C). Thermometer (E). Ammeter []
(B). Hygrometer (D). Galvanometer
15. Which of the following diseases attacks women only?

- (A). Lung cancer (C). HIV/AIDS (E). Tuberculosis []
 (B). Cervical cancer (D). Sickle cell

16. What is the name of the part of an eye marked **A** in the figure below?



- (A). Iris (C). Cochlea (E). Conjunctiva []
 (B). Pupil (D). Lens

17. The direct change of matter from gaseous state to solid state is called:

- (A). Sublimation (C). Evaporation (E). Melting []
 (B). Deposition (D). Freezing

18. Hassan and Mwajuma married each other and got a baby boy. Which Chromosomes represent a boy?

- (A). YY (C). XY and XX (E). XX and YY []
 (B). XY (D). XX

19. Which symbol among the following represent Carbon dioxide gas?

- (A). H₂O (C). NaCl₂ (E). CaCO₃ []
 (B). CO₂ (D). CO

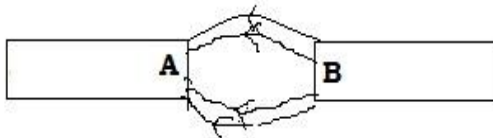
20. A reflected sound refers to:

- (A). An echo (C). Mirage (E). Noise []
 (B). Shadow (D). Vibration

21. The following are female parts of a flower **EXCEPT** ?

- (A). Anthers (B). ovules (C). ovary (D). style (E). stigma []

22. What is the pole of a magnet labeled **A** in the diagram below?



- (A). South Pole (C). Magnetic pole (E). North – South Pole []
 (B). North Pole (D). Lines of force

23. Light is **NOT** a stimulus of the following organs, **EXCEPT**:

- (A). Ears (B). Skin (C). Eyes (D). Nose (E). Tongue

24. The raw materials needed for photosynthesis in plants are:

- (A). Water and Oxygen gas (D). Water and roots []
 (B). Water and Carbon dioxide gas (E). Water and glucose
 (C). Water and leaves

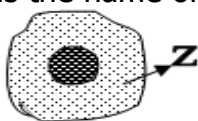
25. Lack of Vitamin **B** in a diet causes which disease?

- (A). Beriberi (C). Pellagra (E). Riboflavin []
 (B). Scurvy (D). Rickets

22. At what temperature does the pure water freeze?

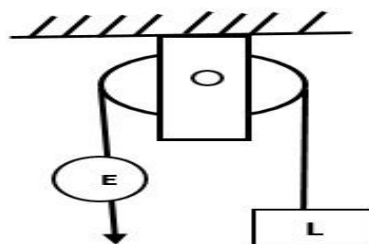
- (A). 200^oC (C). 0^oC (E). 37^oC []
 (B). 90^oC (D). 100^oC

23. What is the name of the part marked by letter Z in the diagram below?



- (A). Nucleus (C). Cell wall (E). Cell membrane []
 (B). Cytoplasm (D). Vacuole

24. Which of the following formula explains the meaning of work as applied in science?
 (A). Force + Distance (C). Load × Effort (E). Energy/distance []
 (B). Force × Distance (D). Load ÷ Effort
25. The researched and analyzed data can be represented by:
 (A). Graph (C). Calculations (E). Analysis []
 (B). Conclusion (D). Interpretation
26. The important hormonal gland that controls other glands is:
 (A). Adrenal (C). Pineal (E). Testicles []
 (B). Thyroid (D). Pituitary
27. The normal temperature of a healthy human being is:
 (A). 73°C (B). 100°C (C). 0°C (D). 37°C []
28. A mixture of different gases is called:
 (A). Wind (B). Solution (C). Dust (D). Air (E). Water []
29. Lack of strong bones and teeth is caused by insufficient:
 (A). Proteins (C). Vitamin C (E). Fats and Oil []
 (B). Carbohydrates (D). Calcium minerals
30. The release of mature ovum from the ovary is known as:
 (A). Ejaculation (C). Perturbation (E). Masturbation []
 (B). Menstruation (D). Ovulation
31. If the incident angle is 60°, what will be the reflected angle in a Plane mirror?
 (A) 90° (B). 75° (C). 45° (D) 40° (E). 60° []
32. The organ that is responsible for pumping blood in the human body is called:
 (A). Stomach (B). Kidney (C). Lungs (D). Liver (E). Heart []
33. Which of the following appliances use direct electric current?
 (A). Refrigerator (C). Torch (E). Fan []
 (B). Electrical iron (D). Electrical cooker
34. Which part of a cell is found in plant cell but not in an animal cell?
 (A). Nucleus (B). Cytoplasm (C). Cell wall (D). Vacuole (E). Chloroplast []
35. Which of the following is an important nutrient for a pregnant woman to get in large quantities?
 (A). Protein (B). Carbohydrates (C). Fats (D). Minerals salt (E). Vitamins []
36. Urinating frequently, producing large quantities of urine and frequent thirst are symptoms of which disease?
 (A). Cancer (B). Diabete (C). Kwashiorkor (D). Whooping cough (E). Anaemia []
37. What type of pulley is represented by the diagram below?
 (A). Fixed pulley
 (B). Single movable pulley
 (C). Single fixed pulley []
 (D). Immovable pulley
 (E). Double pulley

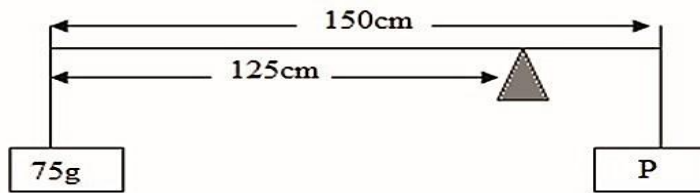


38. How many stages of growth are there in a complete metamorphosis?
 (A). One (B). Three (C). Four (D). Five (E). Two []
39. Which of the following organisms is **NOT** a reptile?
 (A). Chameleon (B). Lizard (C). Crab (D). Tortoise (E). Snake []
40. Which of the following is a physical change?
 (A). Fermentation of milk (D). Reaction between acid and base []
 (B). Burning of papers (E). Decaying of plants
 (C). Water to steam

SECTION B: SHORT ANSWERS QUESTIONS

Answer the following questions by writing the correct answers or calculations

41. Find the Mechanical Advantage (M.A.) of a wheel barrow which carries a load of 90kg by using an effort of 30N
 42. Find the value of letter **P** in the diagram below



43. A system of five pulleys has raised the load by 10 cm. The effort used has moved a distance of 50 cm. Find the efficiency of the system
 44. The animals that eat both grasses and meat are known as _____
 45. The fusion of two gametes to form a zygote is termed as _____
 46. Name three types of soils

- i. _____
- ii. _____
- iii. _____

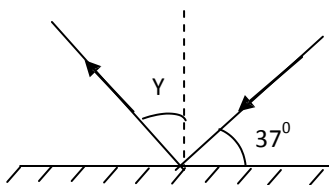
47. Mention two types of current electricity

- i. _____
- ii. _____

48. State three states of matter

- i. _____
- ii. _____
- iii. _____

49. Study the following diagram which shows the reflection of light.




Determine the value of angle Y.

50. Mention three necessary condition for seed germination

- i. _____
- ii. _____
- iii. _____

51. Deficiency of the food below leads to a malnutrition condition called _____



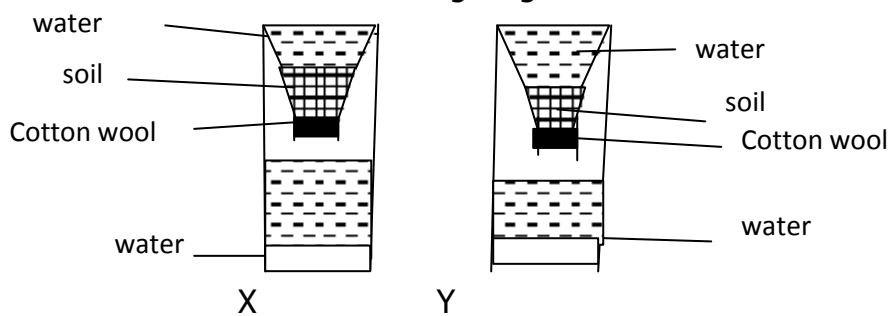
52. Name five main sources of renewable energy.

- i. _____
- ii. _____
- iii. _____
- iv. _____
- v. _____

53. The animals whose body temperature remains constant regardless of their environment are also called _____

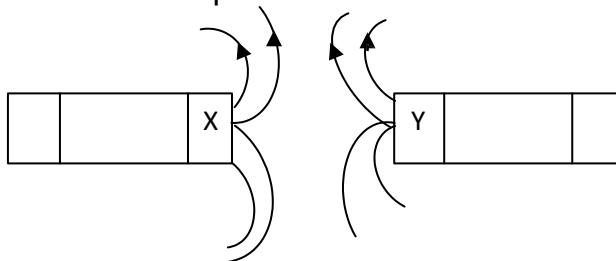
54. Which gas is highly required for the formation of protein in plants?

55. The students did an experiment in which they put a certain amount of water in a soil which was in two containers shown by letters X and Y as in the following diagram. The results of the experiment is shown in the following diagram.



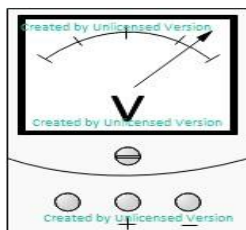
The result of this experiment show that in containers x and y have _____ and _____ kinds of soil respectively.

56. Determine the poles marked X and Y. What do they represent?



57. Mention two types of transformers

- i. _____
- ii. _____

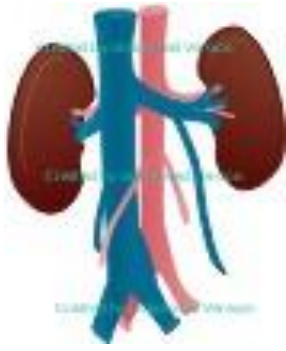


58. This electric device is called _____

59. Mention three conditions necessary for photosynthesis

- i. _____
- ii. _____
- iii. _____

60.



The diagram below represents _____ system

Use the words in the box to fill in the blanks.

stomach	chewed	food	energy
rectum	liver	mouth	small intestine
waste	saliva	large intestine	digestion
system	swallow	tongue	pharynx
acid	absorbed	liquids	esophagus

All animals need to eat _____ to get _____ to live. But in order to use this food, they have to break it down in a process called _____. so, all animals have a group of connected organs called the digestive _____.

In humans, the process of digestion begins in the _____ where food is _____ into small pieces by the teeth. The _____ helps by moving these pieces around. These pieces are covered by _____, or spit. The saliva makes the food slippery so that it is easier to _____. It also helps to break down the food.

Once the food is swallowed, it passes through the _____, which is like a gate that sends food into the _____ and air into the lungs. The food travels down the esophagus and into the _____. Once in the stomach the food is mixed with _____ and crushed some more.

After spending some time in the stomach, the food is sent into the _____ where nutrients are _____. The _____ helps by producing some digestive juices called bile. Next, the remaining food goes into the _____ where the _____ are absorbed. The remaining food is called _____ and it is pushed into the _____ where it waits before leaving the body.

**MINISTRY OF EDUCATION, SCIENCE AND TECHNOLOGY
YEMEN ENGLISH MEDIUM PRIMARY SCHOOL
SIXTH HOLIDAY PACKAGE APRIL - 2020**

**GRADE: SIX
SUBJECT: SOCIAL STUDIES**

HOME ASSIGNMENT

DURATION: 1 WEEK

DATE:

		2020
--	--	------

NAME: _____

INSTRUCTIONS TO CANDIDATES:

1. This paper consists of more than 50 questions
 2. Read the instructions of each question carefully.
 3. Write your full names on the paper given.
-
4. Answer all the questions according to the given instructions.
 5. All answers should be written in the space provided
 6. Keep your work neat.

Choose the correct answer from the given alternative by writing its letter

1. There are _____ types of disaster
(a)Two (b) three (c) four (d) five ()
2. Environmental disaster are caused by _____
(a)Animal (b) human activity (c) industries (d) Afforestation ()
3. _____ are the item that were made and used by man in the past
(a)Artifacts (b) archeologists (c) remains (d) events ()
4. Oils spills in water leads to _____
(a)Death of animal in water (b) air pollution (c) problems in transport ()
5. _____ this is the situation where by the land is submerged by water from river due to heavy rainfall
(a)Floods (b) hurricane (c) land slide (d) soil erosion ()
6. The 3rd term president of the united republic of Tanzania was _____
(a)B.W. Mkapa (b) Alexander Nyirenda (c) mwakyembe (d) Jakaya Mrisho Kikwete ()
7. _____ is the increase of temperature eve in the word
(a)Global warming (b) Covid-19 (c) thunderstorms and lightning (d) hot temperature ()
8. The removal of the top layer of the soil from one point to another is referred to as ____
(a)Erosion (b) soil erosion (c) land side (d) over grazing ()
9. Afforestation means _____
(a)Planting trees in new area (b) planting trees again (c) deforestation (d) overgrazing ()
10. _____ refers to prolonged shortage of water supply in the soil due to the scarcity of rainfall
(a)Desert (b) drought (c) soil erosion (d) dry and ()

MATCH THE ITEM IN THE LIST A BY THE ITEM IN THE LIST B

S/N	LIST A	ANSWERS	LIST B
11.	Oral tradition	A.	The council dealing with environment conservation
12.	Historical sites	B.	1905-1907
13.	Museums	C.	Places with historical remains
14.	Dry season	D.	The first president of Tanzania
15.	Mwl. J.K. Nyerere	E.	The policy of socialism and self reliance were declared
16.	Mtwa mkwawa	F.	less or no rain fall
17.	Artifacts	G.	Items of the past used and made by man
18.	NEMC	H.	Building for preserving the items of the past
19.	Arusha declaration	I.	Historical information are transmitted from on generation to another
20.	Majimaji resistance	J.	The chief of Hehe

Fill in the blank spaces with the correct answer

21. Chama Cha Mapinduzi (CCM) was formed in _____
22. _____ was moved from Muscat Oman to Zanzibar in 1940
23. _____ marks the time when Jesus Christ was born
24. _____ is the weight of air in the atmosphere per unit area
25. _____ is used to measure the amount of moisture in temperature
26. _____ is the liquid that is found in the thermometer
27. _____ is the air that is in motion
28. Books, magazine, news papers, maps and journals with historical information are found in _____ (museums, archives)
29. _____ is the place where the instruments of weather are found.
30. _____ this is the prediction of weather condition at a particular place using the data from the weather station.
31. List down five elements of good map
 - (a) _____
 - (b) _____
 - (c) _____

(d) _____

(e) _____

32. Types of weather includes

(a) _____

(b) _____

(c) _____

(d) _____

(e) _____

33. The art of collecting historical information to be used in the future is called

34. Area which were highly scrambled during scramble and partition of Africa were

(a) _____

(b) _____

(c) _____

35. The effects of Berlin conference were

(a) _____

(b) _____

(c) _____

(d) _____

36. List down the heroes of Africa who struggled to emancipate Africa from colonialism

(a) _____

(b) _____

(c) _____

(d) _____

(e) _____

37. Write the events of the following years

(a) 1961 _____

(b) 1967 _____

(c) 1978-1979 _____

(d) 1984 _____

(e) 1992 _____

(f) 1995 _____

(g) 1999 _____

Define the following terms

38. Disaster _____

39. Land slide _____

40. Solar eclipse _____

41. Aphelion _____

42. Orbits _____

43. Perihelion _____

44. Orbits _____

45. Historical events _____

46. Archeology _____

47. Deforestation _____

48. Berlin conference _____

49. List down the forms of environmental degradation

(a) _____

(b) _____

(c) _____

(d) _____

(e) _____

50. Mention ways of protecting the environment from any form of degradation

(a) _____

(b) _____

(c) _____

(d) _____

(e) _____

51. List down five activities which were done by the colonialist in Tanganyika

(a) _____

(b) _____

- (c) _____
- (d) _____
- (e) _____

52. What were the negative effects of colonialism in Africa?

- (a) _____
- (b) _____
- (c) _____
- (d) _____
- (e) _____

53. Write down four positive effects of colonialism in Africa

- (a) _____
- (b) _____
- (c) _____
- (d) _____

54. Mention three voluntary activities in our country

- (a) _____
- (b) _____
- (c) _____

55. The solar system is composed of

- (a) _____
- (b) _____
- (c) _____