

YEMEN ENGLISH MEDIUM PRIMARY SCHOOL


HOLIDAY PACKAGE NO-4

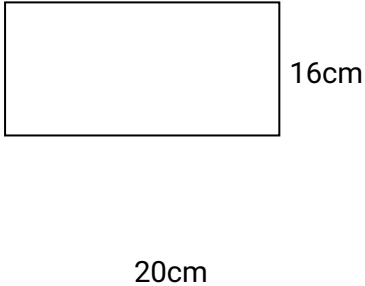
SUBJECT: MATHEMATICS

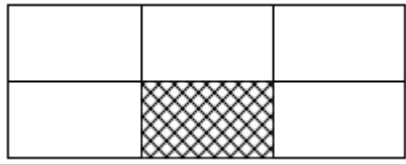
NAME \_\_\_\_\_ DATE \_\_\_\_\_ STD IV

----- Answer all questions

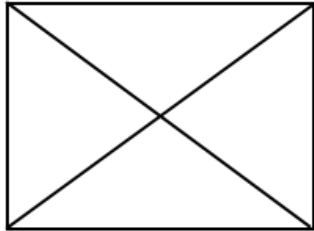
NO.	QUESTIONS	WORKING PLACE	ANSWER
1.			
(i)	$125 + 456 =$		
(ii)	$9001 - 999 =$		
(iii)	$6340 \div 20 =$		
(iv)	$453 \times 35 =$		
(v)	$\frac{8}{10} - \frac{1}{10} =$		
(vi)	$\frac{4}{11} + \frac{2}{11} + \frac{1}{11} =$		
2.	Write XLIX in ordinary numbers		
(i)			
(ii)	Write 20,001 in words		

(iii)	<table style="margin-left: auto; margin-right: auto;"> <thead> <tr> <th style="text-align: left;">Hours</th> <th style="text-align: left;">Minutes</th> </tr> </thead> <tbody> <tr> <td>11</td> <td>25</td> </tr> <tr> <td>+ 9</td> <td>35</td> </tr> <tr> <td colspan="2" style="text-align: center;">_____</td> </tr> <tr> <td colspan="2" style="text-align: center;">_____</td> </tr> </tbody> </table>	Hours	Minutes	11	25	+ 9	35	_____		_____			
Hours	Minutes												
11	25												
+ 9	35												
_____													
_____													
(iv)	<table style="margin-left: auto; margin-right: auto;"> <thead> <tr> <th style="text-align: left;">sh</th> <th style="text-align: left;">Cts</th> </tr> </thead> <tbody> <tr> <td>1948</td> <td>20</td> </tr> <tr> <td>- 999</td> <td>25</td> </tr> <tr> <td colspan="2" style="text-align: center;">_____</td> </tr> <tr> <td colspan="2" style="text-align: center;">_____</td> </tr> </tbody> </table>	sh	Cts	1948	20	- 999	25	_____		_____			
sh	Cts												
1948	20												
- 999	25												
_____													
_____													
(v)	<table style="margin-left: auto; margin-right: auto;"> <tbody> <tr> <td style="text-align: right;">8 A 3 5</td> </tr> <tr> <td style="text-align: right;"><u>+ 1 6 9 A</u></td> </tr> <tr> <td style="text-align: right;">_____</td> </tr> <tr> <td style="text-align: right;"><u>1 0 6 3 4</u></td> </tr> </tbody> </table> <p>Find the value of A</p>	8 A 3 5	<u>+ 1 6 9 A</u>	_____	<u>1 0 6 3 4</u>								
8 A 3 5													
<u>+ 1 6 9 A</u>													
_____													
<u>1 0 6 3 4</u>													
3. (i)	<p>Find the perimeter of the square below</p> <div style="text-align: center; margin-top: 10px;">  </div>												

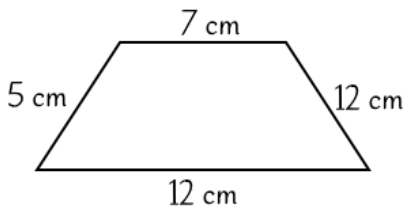
	29cm		
(iii)	Write the following numbers in figures. (seventy eighty thousand four hundred and sixteen)		
(iv)	In a village there are 48369 men, 17938 women and 9874 children. How many people are there in that village?		
4. (i)	Find the area of the following rectangle  <p>A rectangle is shown with a horizontal length of 20cm and a vertical width of 16cm.</p>		
(ii)	Write the fraction of the shaded part		



(iii) How many line segments are there in the figure below?

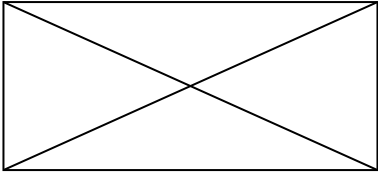


(iv) What is the perimeter of the figure below?



(v) Change 800 metres into centimetres

5.  
(i) Jumanne's salary is sh 98,500. he spends  $\frac{1}{4}$  of his salary for paying his daughter's school fees. How much money is left from his salary?

(ii)	How many triangles has this figure? 		
iii	Juma starts tuition at 5:30pm and ends at 6:20pm. How long does he take for his tuition?		
(iv)	The school has 526 pupils. Half of them did not come to school last week. How many pupils did not attend to school last week?		
(v)	Draw a clock face and show 25 minutes to 11.		

# YEMEN ENGLISH MEDIUM PRIMARY SCHOOL

## HOLIDAY PACKAGE NO-4

### SUBJECT: CIVIC AND MORAL

NAME \_\_\_\_\_ DATE \_\_\_\_\_ STD IV

----- Answer all questions

#### SECTION A: MULTIPLE CHOICES

1. Choose the correct answer and write its letter in the box provided.

(i) Which country does a person called Tanzania come from?

(a) Kenya (b) Dar es Salaam (c) Dodoma (d) Tanzania [ ]

(ii) A resource is any valuable thing found in which area?

(a) Classroom (b) Economy (c) Source (d) Environment [ ]

(iii) What does a symbol represent?

(a) A key (b) A nation (c) Something (d) Flag [ ]

(iv) The following are NOT qualities of bad friendship, EXCEPT?

(a) Moral (b) Honest (c) Immoral (d) Obedience [ ]

(v) How do we call a person who lives in our country temporarily?

(a) Citizen (b) Patriot (c) Refugee (d) Non-citizen [ ]

2. Match the terminologies in LIST A with their right facts from LIST B and write its letter in the space provided in the middle of the table.

	LIST A	ANS	LIST B
i	School committee		A. Controls the behaviors of pupils
ii	Head teacher		B. In charge of the school in the absence of the head teacher
iii	Assistant head teacher		C. Makes plans for development of the school
iv	Academic master		D. In charge of all activities at school

			E. Coordinates, sports at school
			F. Manages the performance of pupils

3. Use the words provided in the box bellow to answer the questions

J. K. Nyerere, Mineral, Rule of law, Village chairperson, Village executive officer.

- (i) Who is appointed leader in the village government level? \_\_\_\_\_
- (ii) Which tribe in Tanzania called their chief Omukama? \_\_\_\_\_
- (iii) What is the name of the leader who appears on the front side 1000 Tanzania shilling notes? \_\_\_\_\_
- (iv) A situation whereby all citizen adhere to the laws of the nation and nobody is above the law is called \_\_\_\_\_

4. Complete the following passage

The National Emblem is a badge of our Nation it is also known as the coat of arms. It consist of twelve components with different meaning. For example the national motto of Tanzania which is (I) \_\_\_\_\_, two crops (II) \_\_\_\_\_ and (III) \_\_\_\_\_, stand for cash crops grown in Tanzania and (IV) \_\_\_\_\_ that represent unit, love and hope.

5. Study the following signs and state their meaning



(i) \_\_\_\_\_



(ii) \_\_\_\_\_

6. Read the following passage and answer the questions

A positive attitude simply means looking things in a positive way. It is the attitude of receiving challenges positively

and changes them into opportunities. When facing a challenge, don't castrate in example a person who has shifted to or living in an area where there is not market. You can open a big kiosk and sell commodities needed in that area or take orders from people and then go to the market to buy for them, and then you will payment. A challenge can turn into opportunity.

### Questions

- (i) Suggest the suitable of the passage \_\_\_\_\_
- (ii) The challenge can turn to \_\_\_\_\_
- (iii) Looking things in a positive way refers to \_\_\_\_\_
- (iv) We are advised to receive challenges in which condition? \_\_\_\_\_

## YEMEN ENGLISH MEDIUM PRIMARY SCHOOL

### HOLIDAY PACKAGE-4

### SUBJECT: SOCIAL STUDIES

NAME \_\_\_\_\_ DATE \_\_\_\_\_ STD IV

----- Answer all questions

#### SECTION A: MULTIPLE CHOICE

1. Choose the correct answer and write its letter in the box provided.



- (i) What are the importance of cleaning litter and planting trees?  
 (a) Destructing environment (b) Preserving environment  
 (c) Degradation environment (d) Polluting environment [ ]
- (ii) Who was the fourth president of Tanzania?  
 (a) John Pombe Magufuli (b) Benjamini William Mkapa  
 (c) Ali Hassan Mwinyi (d) Jakaya Mrisho Kikwete [ ]
- (iii) Ainekisha go to Lake Ikimba to catch fish from water every day. This person involves herself which activity?  
 (a) Mining (b) Agriculture (c) Fishing (d) Swimming [ ]
- (iv) Which among the following is an advantage of clean environment?  
 (a) Reduces pollution (b) Brings pollution (c) Causes diseases  
 (d) Look unattractive [ ]
- (v) The following are the areas which are affected by invaders; EXCEPT?  
 (a) Open spaces (b) Water sources (c) Mountain (d) Fertile soil [ ]
- (vi) Umwinyi feudal system which was practiced in which Tanzania?  
 (a) Western (b) Northern (c) Central (d) Coast [ ]
- (vii) How do we call a group of people who are closely related?  
 (a) Village (b) Tribe (c) Clan (d) Family [ ]
- (viii) The following are man-made components of the environment EXCEPT?  
 (a) Railways (b) Land (c) Dams (d) Buildings [ ]

2. Match the terminologies in LIST A their right facts from LIST b and write its letter in the space provided in the middle of the table.

	LIST A	ANSW	LIST B
i.	Land alienation		A. Paid huge wages
ii.	Humiliation		B. Working willingly and happily

iii.	Forced labor		C. Being valued and appreciated
iv.	Small wages		D. Giving people land ownership
v.	Invasion		E. Based on land ownership
vi.	Feudalism		F. Entering somewhere without a permission
			G. Taking land of Africans by force
			H. Working by force with very low wages
			I. Decreasing someone's social status
			J. Being paid less

### SECTION B

**3. Read this passage and answer the questions which follow.**

Saturn is the sixth planet from the sun. After Jupiter it is the second largest planet in the solar system. Its diameter at the equator is approximately 75000 miles (120,500km). Saturn's orbit lies between Jupiter and Uranus and it takes about 30 Earth years to complete one revolution around the sun. It rotates about its axis in 10.8 hour, which is the length of a day on Saturn. Saturn like Jupiter is one of the gas giants and is composed mostly of Hydrogen and some Helium. Saturn's most famous features is its ring system. This is made up of hundreds of thousands of individual rings held in orbit by the pull of Saturn's gravity. The rings are made up of countless ice chunks and dust particles. In addition to the ring system, there are more than 50 known moons that orbit Saturn.

- (i) Suggest the title of the passage above \_\_\_\_\_
- (ii) What is the diameter (in km) of the planet discussed in the passage above? \_\_\_\_\_
- (iii) What is the unique characteristics of the planet discussed in the passage above \_\_\_\_\_
- (iv) The planet discussed in the passage above is composed by which gasses?  
 (a) \_\_\_\_\_ (b) \_\_\_\_\_
- (v) The planet discussed above has got how many moons? \_\_\_\_\_
- (vi) The planet which discussed in the passage above takes how long to complete one rotation?  
 \_\_\_\_\_

**4. Study the image below and answer the questions which follow**



- (i) The instrument of weather above is called \_\_\_\_\_
- (ii) What is the standard unit of the instrument of weather in the picture above?  
\_\_\_\_\_
- (iii) The instrument of weather above is used to measure which factor wind \_\_\_\_\_
- (iv) Which area is common to find the instrument of weather in the picture above? \_\_\_\_\_

YEMEN ENGLISH MEDIUM PRIMARY SCHOOL

HOLIDAY PACKAGE NO-4

SUBJECT: ENGLISH

NAME \_\_\_\_\_ DATE \_\_\_\_\_ STD IV

----- Answer all questions

**SECTION ONE: PREPOSITIONS**

*Make five sentences by using the following prepositions; **under , on ,behind ,in and over***

1. ....
2. ....
3. ....
4. ....
5. ....

## SECTION TWO:

Choose the most correct answer and inscribe its letter in the bracket provided.

6. There are too ..... beaks of chickens to feed.

- A. many
- B. any
- C. much
- D. lots

7. .... porridge is being prepared?

- A. How many
- B. How much
- C. Many
- D. Much and many

8. My car is ..... expensive than his car.

- A. most
- B. much
- C. more
- D. cheaper

9. America is ..... richest country in the world.

- A. an
- B. the
- C. a
- D. than

10. "My ..... name is Tryphone", Said the boy.

- A. fathe'rs
- B. fa'thers
- C. father's
- D. fathers'

## SECTION THREE:

Complete the following sentences by using the words given in the box below: -

worst, breaks, admires, None, beaks, child labour, fierce, compounds, dishes

11. Juma Matata is the ..... of all boys in our class because he picks and fights with everyone smaller than him.

12. He ..... the school rule as he fights.

13. Everyone ..... my white and black stripes

14. I deserve to be the king because I am the most ..... animal in the world.

15. ....of the other animals talked instead all bowed to king Lion.

## SECTION FOUR

Fill in the blanks by using the correct word among those given in the bracket in each question.

16. It is ..... to take and use what does not belong to us. (long, wrong, longer, longest)
17. I agree with ..... advice Rehema (you, your, is, are)
18. I know, I know, but who hates the idea of .....!  
(sweeps, sweets, sweats, switches)
19. There is ..... water in the river, go get it for yourself.  
(a lot of, many more, any, few)
20. That boy is as ..... as charcoal. (Blood, Black, Brown, Red)

## SECTION FIVE:

Read the following passage and then answer questions 21 – 25.

One upon a time there was a football match in the forest. The match was played in the Kingdom of King Lion. It was between all animals which feed on plants and those which eat meat only. King Lion became the referee of the match.

Players in the team of plants eaters animals were Brother Elephant, Mr. Giraffe, Uncle Buffalo and others. And players from the team of meat eaters animals were Mr. Dog, Brother Hyena, Uncle fox and many more other animals.

The captain of meat eaters team was Mr. Hyena. And the captain of plants eaters team was Brother Elephant. The two teams played hard. Finally the team of meat eaters animals scored three goals while plants eaters team scored nothing.

## QUESTIONS:

21. The match was played in the .....
- A. Kingdom of king Lion  
B. Town  
C. Village  
D. Heaven
22. Who was the referee of the match?
- A. Brother Elephant  
B. King Lion  
C. Mr. Giraffe  
D. Mr. Dog
- 23 what are the two opponent teams played together?
- A. buns and ugali eaters animals  
B. rice and chips eaters animals  
C. plants and meat eaters animals  
D. I don't know
24. Which team scored three goals?
- A. meat eaters animals  
B. buns eaters animals

- C. plants eaters animals
  - D. mangoes eaters animals
25. Which one among the following can be the "Heading" of the passage above?

- A. Brother Elephant eats plants
- B. The Football Match Between Plants and Meat eaters Animals.
- C. Mr. Hyena the captain
- D. King Lion the referee

YEMEN ENGLISH MEDIUM PRIMARY SCHOOL

HOLIDAY PACKAGE NO-4

SUBJECT: SCIENCE AND TECHNOLOGY

NAME \_\_\_\_\_ DATE \_\_\_\_\_ STD IV

----- Answer all questions

SECTION A: MULTIPLE CHOICE

Write the letter of the correct answer

1. What are the three basic needs of living organisms? \_\_\_\_\_

- a. Food, clothes and shelter
  - b. Food, shelter and luxury
  - c. Air, water and food
  - d. Food, air and shelter
2. The characteristic that is shown by living things as they increase in size and weight is \_\_\_\_
    - a. Reproduction
    - b. growth
    - c. movement
    - d. sensitivity
  3. Which among the following things floats on water?
    - a. Nail
    - b. coin
    - c. brick
    - d. dry wood
  4. The following are forms of energy except \_\_\_\_
    - a. Mass
    - b. heat
    - c. light
    - d. sound
  5. Things which allow light to pass through are called \_\_\_\_
    - a. Translucent
    - b. transparent
    - c. opaque
    - d. material
  6. Which part of the body is used for identifying the taste of things?
    - a. Nose
    - b. skin
    - c. tongue
    - d. eyes
  7. The food that contains nutrients which are useful in the human body is called \_\_\_\_
    - a. Nutritious food
    - b. delicious food
    - c. sweet food
    - d. healthy food
  8. Some of the modern instruments of communication are \_\_\_\_
    - a. Horns, drums and fire
    - b. Horns, trumpets and drums
    - c. Newspapers, radios and drums
    - d. Computers, telephones and newspapers
  9. Fainting is the result of lack of blood in the \_\_\_\_
    - a. Whole body
    - b. brain
    - c. limbs
    - d. heart
  10. Which statement is not correct among the following?
    - a. HIV causes AIDS
    - b. We should take care of AIDS victims
    - c. HIV is a virus but AIDS is a disease
    - d. HIV is caused by AIDS

## SECTION B: MATCHING ITEMS

### **LIST A**

11. Ability of the body to resist infections and diseases \_\_\_\_\_
12. Infectious diseases, example AIDS \_\_\_\_\_
13. Non-infectious diseases, example kwashiorkor \_\_\_\_\_



14. Eruption disease for example cholera \_\_\_\_\_
15. Short form for "Human Immunodeficiency Virus" \_\_\_\_\_

**LIST B**

- a. Typhoid, cholera and AIDS caused by disease germs
- b. Spread rapidly
- c. HIV
- d. Not caused by disease germs
- e. Immunity
- f. AIDS
- g. Worms

SECTION C: FILLING GAPS

16. The passing of message from one person to another is called \_\_\_\_\_
17. The picture below shows a \_\_\_\_\_



18. The immediate help given to a person who is injured or becomes ill suddenly before medical treatment is called \_\_\_\_\_
19. Name the four instruments which are used for communication today
20. The two groups of living organisms are \_\_\_\_\_
21. Boiled and filtered water is called \_\_\_\_\_ -
22. Crocodiles and frogs are examples of living organisms that live in two types of habitats. These habitats are \_\_\_ and \_\_\_\_\_
23. What is matter \_\_\_\_\_
- Mention two state of matter
24. \_\_\_\_\_
25. \_\_\_\_\_

YEMEN ENGLISH MEDIUM PRIMARY

KAZI YA NYUMBANI NAMBA-4

SOMO: KISWAHILI

JINA \_\_\_\_\_ TAREHE \_\_\_\_\_ DRS IV

Jibu maswali yote

SEHEMU KWANZA

Panga silabi zifuatazo ili kuleta maana sahihi.

1. Vimchu = \_\_\_\_\_

2. Iya = \_\_\_\_\_

3. Dhabua = \_\_\_\_\_

4. Yalawi = \_\_\_\_\_

5. Lasibi = \_\_\_\_\_

SEHEMU YA PILI

Jaza nafasi zilizoachwa wazi kwa kuchagua jibu sahihi kati ya yaliyoko katika mabano.

6. Mwezi wa sita mwaka jana timu ya yanga \_\_\_\_\_ kombe.

( itabeba, inabeba, itakuwa inabeba, ilitwaa )

7. Wanafunzi wa Darasa la nne wakifuulu mihini huu \_\_\_\_\_ darasa la tano mwakani.

( waliingia, wataingia, wameingia, huingia )

8. Kulwa na Doto \_\_\_\_\_ mpira kila siku.

( hucheza, wacheze, kucheza, walicheza )

9. Wazazi walishindwa kumsamehe kwa sababu alionesha \_\_\_\_\_

( kibuli, kiburi, kibali, kaburi )

10. Loo! maji yote \_\_\_\_\_

( yakimwagika, yamwagwa, yamemwagika, tamagwa )

### SEHEMU YA TATU

(a) Kamilisha methali hizi.

11. Mtaka yote kwa pupa. \_\_\_\_\_

12. Jungu kuu \_\_\_\_\_

13. Kuishi kwingi \_\_\_\_\_

(b) Tegua vitendawili hivi.

14. Nina chemchemi isiyokauka \_\_\_\_\_

15. Babu amelala ndani ndevu ziko nje \_\_\_\_\_

### SEHEMU YA NNE

Tumia maneno yafuatayo kukamilisha habari hii.

mkuki,	bunduki,	nyati,	mwindaji,	wakubwa
--------	----------	--------	-----------	---------

Baba yake Yakobo ni (16) \_\_\_\_\_ Anawinda wanyama wadogo na (17) \_\_\_\_\_.

Anawinda wanyama wadogo kwa kutumia (18) \_\_\_\_\_, pinde na mishale. Anatomia

(19) \_\_\_\_\_ kuwinda wanyama wakubwa kama vile (20) \_\_\_\_\_ na pundumilia.

### SEHEMU YA TANO

Soma habari ifuatayo kisha jibu maswali kwa kuandika herufi ya jibu lililo sahihi katika kisanduku.

Familia ya Mzee Jambila ina watu sita. Watoto wawili wavulana, Matia na Amani na wasichana wawili, Josephine na Rozimeri. Mtoto wa kwanza kuzaliwa ni Josephine na wa mwisho, yaani kitindamimba ni Amani. Rozimeri amezaliwa kati ya Matia na Amani.

Watoto wote wa Mzee Jambila wamesoma hadi kidato cha sita. Kila mmoja na kazi yake. Amani ni rubani wa ndege na Rozimeri ni Muuguzi. Waliobaki ni walimu.

21. Kifungua mimba katika familia ya Mzee Jambila ni nani?  
(a) Matia (b) Rozimeri (c) Josephine (d) Amani  
( )
22. Mtu mmoja ambaye hakutajwa katika familia ya Mzee Jambila ni:-  
(a) Mama (b) Baba (c) Kaka (d) Dada ( )
23. Watoto wawili wa Mzee Jambila ambao ni walimu ni: - (a) Josephine na Matia  
(b) Amani na Rozimeri (c) Josephine na Amani (d) Matia na Rozimeri ( )
24. \_\_\_\_\_ ni rubani wa ndege.  
(a) Josephine (b) Matia (c) Rozimeri (d) Amani ( )
25. Rozimeri ni mtoto wa ngapi kuzaliwa.  
(a) mtoto wa ne (b) mtoto wa pili (c) mtoto wa tatu (d) mtoto wa tano  
( )