

YEMEN ENGLISH MEDIUM PRIMARY SCHOOL

HOLIDAY PACKAGE No 2

SUBJECT: CIVIC AND MORAL

NAME _____ DATE _____ STD III

TIME 1:30HRS

SECTION: A

Answer all questions

Choose the correct answer and write its letter in the space provided.

1. Tanzania and Zanzibar united in :- _____
A. 1977 B. 1971 C. 1961 D. 1964
2. Who was the first president of Tanzania? _____
A. Aman Abeid Karume B. Benjamin William Mkapa C. Mwalimu Julius Kambarage Nyerer. D. Dr. John Pombe Maguful.
3. The national flag has _____ colours
A. One B. Four C. Five D. Tree
4. A person who has power to control and direct people is known as a _____
A. Teacher B. Leader C. Chair man D. President
5. A place where children go to study is known as _____
A. Kitchen B. School C. Hospital D. Church
6. Who runs the school when the head teacher is away? _____
A. Academic teacher B. Head of departments C. Assistant head teacher D. Monitors
7. A person who is responsible to prepare school timetable and supervise teaching and learning is the _____
A. Academic teacher B. Prefects C. Head teacher D. Assistant head teacher
8. Tanzania shilling is in two forms which are:- _____
A. Money B. Dollar and Euro C. Notes and Coins D. Kwacha and Faranga
9. Tanzania national language is _____
A. Kihaya B. Kinyambo C. English D. Kiswahili
10. Among the following which is not the national symbol?
A. National anthem B. Tanzanian currency C. National parks
D. National flag
11. The mistreatment by an adult that harms child's life is known as
A) child abuse B) child right C) child security D) child responsibility
12. The head of pupil's government in a school is called
A) Head prefect B) monitor C) teacher D) Head teacher
13. Which colour in a national flag show that our country is rich in mineral

14. There are _____ types of democracy
 A) black by yellow B) yellow C) blue D) green
15. Which statement is correct among the following?_
 A) five B) three C) two D) four
16. _____ Is the form (system) of governance where by people have the right to choose their leaders
 A) it is good to play in dirty water B) pupils are advised to jump on desks
 C) sleeping without mosquito net is a good habit D/ fighting is dangerous
17. The process of planting trees to replace the others which were cut is called _____
 A) election B) democracy C) good governance D) a responsibility
18. Which of the following action shows good behaviour?____
 A) deforestation B) a forestation c) cultivation D) reforestation
19. _____ Is a plan that shows events and time allocation
 A. Helping a person in need B) fighting
 C) using abusive language D) selfish
20. A person who belongs to a certain country is called a _____
 A) a school B) a timetable C) a time keeper D) a diary
21. One of the following is not an act of child abuse, which one?
 A) foreigner B) refugee C) citizen D) learner
22. one of the following is not a school rule, which one?
 A) giving then little food A) beating the children C) letting them play D) scolding them
23. the following are components of the coat of arms, except ____
 a) attending school regularly b) respecting the right of others
 c) shaking hands at school d) to observe the uniform code of the school
24. _____ is the meeting of the village leaders
 a) elephant tusks b) a man and woman c) national flag
 d) presidential flag
25. the habits that endanger our health are _____
 a) village council b) village assembly c) economic committee
 d)defence committee
26. culture is important because _____
 a) using drugs such as heroin, cocaine and marijuana b) listening to a teacher c)
 talking with your parents or guardians d) going to school every day
27. the rights and freedom of every tanzanian are provided in the ____
 a) it is an identification of a society b) it gives us food c)it brings rainfall
 d) it is a school lesson

28. top leaders of a school are _____
 a) court b) constitution c) family d) parliament
- a) head prefect, head teacher and prefects b) school committee, head teacher and assistant head teacher
 c) parents, teachers and prefect d) pupils, monitors and prefect
29. a place where pupils go to learn is called _____
 a) a station b) a timetable c) a church d) a school
30. one of the following is not a quality of good friends which one?__
 a) studying together b/ showing good behaviour c) fighting
 d) helping a person in need
31. school prefects are elected from (among) _____
 a) teachers b) pupils c) teachers and pupils d) parents
32. the following are national symbols except _____
 a) national parks b) national anthem c) national currency
 d) national emblem
33. tanzania was formed in _____
 a) 1962 b) 1961 c) 1964 d) 1992
34. the following are actions that damage trust except _____
 a) telling lies openly b) stealing c) cheating in examination
 d) loving each other
35. a child is a person who is below the age of _____
 a) seventeen b) sixteen c) eighteen d) nineteen

Match the following items and write the letter to the answer in the space provided for answer

	LIST A	ANSWERS	LIST B
36.	Money that we use in our country		A. National value of Tanzania
37.	National language		B. Tanzanian shillings
38.	The union between Tanganyika and Zanzibar		C. The medium of communication of all people of our country
39.	A set of laws and principles that are used to govern the country		D. National motto of Tanzania
40.	Uhuru na Umoja		E. National constitution

Study the picture below and answer the questions which follow



41. What is the value of the banknote above? _____
42. Name the president printed on the banknote above _____
43. Which feature is found at the back of the banknote above? _____
44. Mention an institution responsible to offer to and monitor the circulation of the banknote above _____

Mention three national symbols.

45. _____
46. _____
47. _____

Mention at least two risk behaviors

48. _____
49. _____

50. Mention any two types of behaviors

- A) _____ B) _____

YEMEN ENGLISH MEDIUM PRIMARY SCHOOL
HOLIDAY PACKAGE No 2

SUBJECT: SOCIAL STUDIES

NAME _____ DATE _____ STD III
TIME 1:30HRS

Answer all questions

SECTION A: MULTIPLE CHOICE

Choose the correct answer and write it letter on the brackets provided

- _____ is a degree of hotness or coldness of a body
A. humidity
B. clouds
C. temperature
- Father and mother are called _____
A. parents
B. children
C. uncle
- _____ is a group of people who are closely related to each other
A. family
B. village
C. school
- There are _____ types of families
A. one
B. six
C. three
- J.K. Nyerere was the first president of _____
A. Tanzania
B. Rwanda
C. Kenya
- Temperature is measured by using _____
A. thermometer
B. barometer
C. wind
- The following tools are used in cleaning the classroom EXCEPT _____
A. broom
B. panga
C. sponge and water
- A slasher is used for _____
A. cutting grasses
B. sweeping
C. collecting rubbish
- Which of the following is not a greeting style?
A. kneeling
B. hugging
C. running

10. A system of belief that tells what to worship and where to pray in the society is known as
 A. religious
 B. customs
 C. traditions
11. Who is the current president of Tanzania? _____
 A. Mwalimu Julius Kambarage Nyerere B. H. E. Dr. John Joseph Pombe Magufuli C. H.E All Hassan Mwinyi
12. A place where people live is called _____
 A. Land B. Home C. Hospital
13. The process of catching fish from water bodies is called _____
 A. Trading B. Fishing C. Mining
14. Many trees that grow together make a _____
 A. School B. Forests C. Air
15. _____ Is the way of life of people or society
 A. Culture B. Jumping C. Singing
16. Sweaters, socks, gloves and scarfs are some of the clothes we wear during weather
 A. Cold B. Hot C. Afternoon
17. The following are non living things _____
 A. Stones B. Plants C. Cows
18. There _____ types of families
 A. One B. Three C. Six
19. Tanganyika united with _____ to form Tanzania
 A. Tanga B. Zanzibar C. Kenya
20. A type of government led by a dictator is _____
 A. Monarch B. Dictatorship C. Republic
21. A type of family made up of father, mother and children _____
 A. Single parent B. Extended C. Nuclear
22. Spread of diseases is the effects of _____
 A. Dirty B. Clean C. Dirty and clean
23. The first stage of seed growth is _____ environment
 A. Germination B. Seedbed C. Plants
24. Thermometer is an instrument that measures _____
 A. Temperature B. Rainfall C. Sunshine
25. _____ Is the means of communication of the society
 A. Language B. Customs C. Religion
26. Late Mwl. Julius Kambarage Nyerere was the _____ of president of Tanzania
 A. 1st B. 2nd C. 3rd
27. How do we call goats and cattle as family resources? _____
 (a) Beautiful animals (c) Wild animals
 (b) Tamed animals (d) Untamed animals
28. Which tool is used to sweep a classroom? _____

- (a) Water pump (b) Wiper (c) A brood (d) A dust bin
29. What is an instrument used to measure temperature?_____
- (a) Thermometer (b) Barometer (c) Hygrometer (d) Dustpan
30. Where does the horizontal line on the compass direction point?
- (a) North West (b) West to South (c) West to East (d) North to South
31. How the tenant classes do in the ubugabire feudal system was ____
- (a) Bakopi (b) Watwana (c) Bagabire (d) Sebuja
32. What is the name given to a leader in the Maasai community?_____
- (a) Morans (b) Layoni (c) Elders (d) Laiboni
33. How do we call a group of people who come from common ancestors?_____
- (a) Family (b) Village (c) Clan (d) Community
34. How do we call an act of keeping information for the future use?_____
- (a) Information collection (c) Livestock keeping
(b) Record studying (d) Keeping records

Match the terminologies in LIST A with their right facts from LIST B and write its letter in the space provided in the middle of the table.

	LIST A	Answers	LIST B
35.	1999		A. Growing crops
36.	Agro-forest		B. Unwanted material in a place
37.	Hapa kazi tu		C. Died mwl J.K.Nyerere
38.	Mulching		D. Slogan of our current president
39.	Wastes		E. Mixing crops with other trees
40.	1962		F. Applying a cover on land to prevent soil erosion
			G. Tanzania become republic

SECTIONS B: SHORT ANSWERS

41. _____ means love for your country and willingness to defend it

42. A total way of life of a given group of people or society is known as _____

Write down any three elements of weather

43. _____

44. _____

45. _____

SECTION: C

Read the following passage and answer the following questions which follow.

Topographical maps are maps that show man-made and natural physical features on the landscape/earth's surface. Man-made physical features are things like roads, buildings, settlements and farms. Natural physical features are things like rivers, mountains, lakes oceans, rift valleys, hills, plateaus and plains.

Questions

Mention three examples of natural physical features from the passage above.

46 _____ 47 _____ 48 _____

Mention two examples of man-made physical features from the passage above.

49 _____ 50 _____

YEMEN ENGLISH MEDIUM PRIMARY SCHOOL

HOLIDAY PACKAGE No 2

SUBJECT: SCIENCE AND TECHNOLOGY

NAME _____ DATE _____ STD III

TIME 1:30HRS

Answer all questions

Choose the best answer and write its letter

- Which of the following things is a living thing?
A. Car B. Fire C. Ant D. Toy boy
- Natural gas is transported mainly by:
A. Pipelines B. Trucks C. Barges D. All three equally
- The following are characteristics of living things except:
A. Movement B. Talking C. Nutrition D. Growth
- Which activity consumes most of petrol?
A. Industries B. Business C. Home D. Transportation
- Light travels in a _____ line.
A. Curved B. Straight C. Bent D. Short
- Ice is water in a _____ state.
A. Solid B. Liquid C. Gaseous
- Which of the following is a natural source of light?
A. Fire B. Lamp C. Sun D. Bulb
- Plants need _____ gas during night.
A. Oxygen B. Nitrogen C. Carbon-dioxide
- Which of the following can't move on its own?
A. Car B. Frog C. Housefly D. Human being
- A scorpion is one of the _____ insects.
A. Good B. Poisonous C. Non-poisonous
- The ability to do work is _____.
A. Mass B. Electricity C. Energy D. Power
- The following materials can float on water except _____.
A. Paper B. Feather C. Iron bar D. Leaf
- Which of the following is not a gas?
A. Fog B. Smoke C. oxygen D. Water tank
- Among the following organs which one is used to detect the amount of sugar in the tea?
A. Skin B. Tongue C. Ears D. Nose
- All living things need _____ for life.
A. Water B. Money C. Fire D. Clothes
- The environment has two major groups of living things which are:-
A. Plants and animals
B. Living things and non – living things
C. Organisations and plants
D. Insects and birds

17. The female anopheles mosquito spreads a disease known as _____ to human beings
- A. Elephantiasis B. Sleeping sickness C. Malaria D. Yellow fever
18. A _____ is a place where animals live and plants grow.
- A. House B. Habitat C. Garden D. Forest
19. There are three basic needs of living organisms _____
- A. Food, clothes, and shelter B. Air, water and food
C. Food, air and shelter D. Food, shelter and luxury
20. _____ is the ability to do work.
- A. Machine B. Power C. Energy D. Weight
21. Which of the following is a form of energy that makes things visible? _____
- A. Light B. Sound C. Heat D. Thermal
22. Objects which allow all the light to pass through them are called _____ objects
- A. Transport B. Translucent C. Transparent D. Opaque
23. Which of the following is a kind of electricity produced after the colliding of two charged clouds? _____
- A. Lightning B. Sound C. Radiation D. Electric resistance
24. Digestion of food begins in the _____
- A. Stomach B. Mouth C. Intestines D. Duodenum
25. Which of the following is not a part of a radio?
- A. Amplifier B. Tuner C. Speaker D. Remote
26. Which of the following is an example of non – living things?
- A. Trees B. locust C. chimpanzee D. house
27. A chameleon protects itself from enemies by _____
- A. Biting B. Changing colour C. Prolonging the tongue D. Wearing colour
28. The young one of a sheep is called a _____
- A. Lamb B. Kid C. Piglet D. Calf
29. An elephant produces sound by _____
- A. Bleating B. Trumpeting C. Neighing D. Grunting
30. Human beings and animals take in air known as _____
- A. Oxygen B. Carbon dioxide C. Nitrogen D. Hydrogen
31. Water in solid state is called _____
- A. Steam B. Ice C. Liquid D. Air
32. Which of the following is not property of translucent objects? _____
- A. Allows a little amount of light to pass through
B. Prevents outsiders to see what is inside

- C. Translucent glasses allow outsiders to see what is inside.
- D. Translucent are good to be used in toilets and bath rooms.

33. The following are source of water except_____

- A. Tank
- B. Lake
- C. River
- D. Rain

34. Which among the following is a source of electronic energy_____

- A. Dry cell
- B. Wire
- C. Bulb
- D. Ammeter

35. Things which give natural light are _____

- A. The sun, lighting, and lamp
- B. Stars lighting, and electric bulb
- C. The sun, torch and lighting
- D. Lighting, the sun and stars.

36. One of the following is need by all living things_____

- A. Air
- B. Stones
- C. Soil
- D. Transport

37. Which of the following actions does not destroy the environment?

- A. Planting trees
- B. Cutting trees for timber
- C. Burning wood to get charcoal
- D. Contracting roads, houses and mining

38. Moving air is called _____

- A. Wind
- B. nitrogen
- C. oxygen
- D. carbon dioxide

39. Aquatic animals like _____ breath in the air dissolved in water

- A. Baboons
- B. Fish
- C. Monkeys
- D. Snakes

40. Heat and light from the sun is known as _____ energy.

- A. Oxygen
- B. sound
- C. solar
- D. electric

Answer questions 41- 46 by matching group A and B in order to get the correct answer and write its letter in the brackets.

GROUP A	ANSWER	GROUP B.
41. Energy	()	A. A sense organ for feeling
42. Tongue	()	B. A form of energy that makes things visible
43. Freezing point	()	C. Burning of wastes
44. First aid	()	D. A sense organ for tasting
45. light	()	E. The first help gives to a causality
		F. Helping the sick person
		G. The point at which water changes to ice
		H. Ability to do work

Complete the questions with correct answers.

46. Write two characteristics of living things

i) _____ ii) _____

47. Mention two living organisms that can live in water and on land

i) _____ ii) _____

48. List three states of water

i) _____ ii) _____ iii) _____

49. Write any two materials which can float on water

i) _____ ii) _____

50. Name this picture below _____



YEMEN ENGLISH MEDIUM PRIMARY SCHOOL
HOLIDAY PACKAGE No 2
SUBJECT: MATHEMATICS



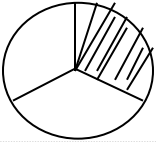

NAME _____ DATE _____ STD III

TIME 2:00HRS

Do all the questions

No.	QUESTIONS	ANSWER
1	Write the following numbers in figures Seven hundred and fifteen	
2	Four thousands	
3	Two thousand five hundred and twelve	
4	Three thousand two hundred and thirty two	
5	Eighty six	
6	Write the following numbers in words 382 =	
7	7384 =	
8	7005 =	
9	9000 =	
10	54 =	
11	Write the following numbers in long forms 4730 =	
12	6321 =	
13	707 =	
14	94 =	
15	4004 =	
16	Write the following numbers in short forms $7000 + 800 + 70 + 5 =$	
17	$4000 + 600 + 20 + 3 =$	
18	$200 + 80 + 7 =$	

19	$8000 + 900 + 50 + 2 =$	
20	$60 + 5 =$	
21	Write the place value of the following numbers 7 in 4723 =	
22	5 in 6485 =	
23	0 in 2801 =	
24	9 in 9472 =	
25	Addition $1124 + 2032 =$	
26	$\begin{array}{r} 2473 \\ +1210 \\ \hline \end{array}$	
27	$\begin{array}{r} 8748 \\ +1175 \\ \hline \end{array}$	
28	$8215 + 465 =$	
29	Take away $8725 - 3214 =$	
30	$\begin{array}{r} 2892 \\ - 351 \\ \hline \end{array}$	
31	$\begin{array}{r} 8423 \\ -3124 \\ \hline \end{array}$	
32	$\begin{array}{r} 4500 \\ -1245 \\ \hline \end{array}$	
33	Multiply $6 \times 10 =$	
34	$213 \times 2 =$	
35	$\begin{array}{r} 542 \\ \times 6 \\ \hline \end{array}$	

36	$2 \times 3 \times 2 =$	
37	$24 \times 0 =$	
38	Divide $60 \div 5 =$	
39	$48 \div 2 =$	
40	$36 \div 3 =$	
41	$125 \div 5 =$	
42	<p>What is the time shown by the face below?</p> 	
43	<p>Write the shaded fractions</p> 	
44		
45		
46	<p>Words problems Anna, John and Mary shared equally 333 mangoes, How many mangoes did each one get</p>	
47	Find the product of 203 and 2	
48	Find the sum of 4214 and 3004	

49	Take away 524 from 796	
50	A class has 45 pupils' if 20 pupils are boys, how many girls are there?	

SUBJECT: ENGLISH

NAME _____ DATE _____ STD III

TIME 1:50HRS

SECTION:A

Introduce your family in five sentences;

1.
2.
3.
4.
5.

Fill in the gaps below

6. Jane is knocking.....the door. (in ,at)
7. The milk is.....the jug. (at ,in)
8. The books are.....the table (at, on)
9. She is sitting.....the chair (under ,on)
10. The cat is..... the bed (in ,under)

TENSES

11. She.....to him on telephone (speak)
12. They.....bananas last week (eat)
13. He.....the bottle (break)
14. It.....very well (sing)
15. She.....a letter to her mother(write)

ONE

MANY

16. Mango

- 17. watches
- 18. boxes
- 19. Class
- 20. Desk

Put the apostrophe sign (') where necessary

- 21. That is Jumas trouser
- 22. It is Fatumas dress
- 23. The headmasters office
- 24. The schools garden
- 25. It is babys bed

Fill in the gaps with the words from the box

[Her, their, yours, our, your]

- 26. That is Jane`s car it is Car.
- 27. My friends have a nice house. It ishouse.
- 28. You have a good pen. So this one is.....
- 29. These cups belong to grace and I. they arecups.
- 30. Please Hawa, take.....books with you now

under line the correct superlative or completeive forms from the following sentences.

- 31. Jane is the tallest girl in class.
- 32. The blue ball is the bigger than the black ball.
- 33. He is the shortest in the house
- 34. Fatma is the fatter than Jane.
- 35. He is the cleverest boy in school.

Write the opposite of the following words

- 36. King.....
- 37. Woman.....
- 38. Clear.....

- 39. Daughter.....
- 40. Big.....

Fill in the missing words

What do we call the young ones of the following animals?

- 41. Dog.....
- 42. Goat.....
- 43. Pig.....
- 44. Chicken.....
- 45. Elephant.....

SECTION B: COMPREHENSIVE

Read out the story carefully and then answer the following question correctly.

Once upon a time there lived a young man called Ali. Ali lived in a small village called Kivuki, he lived there with his wife who was called Fatuma. Ali and Fatuma had four children.

Two of them were boys and the other two were girls, their names were Juma, Hamisi Rehema and Asha. Ali was a fisherman and Fatuma used to sell fruits in the market, their children used to go to school from Monday to Friday and they helped their parent every Saturday and Sunday

Answer the following question

- 46. Where did Ali and his family live? Ali and his family lived at?.....
- 47. What is the name of Ali is wife? His wife's name is.....
- 48. How many children does Ali and his wife have?. They have.....children
- 49. Where do the children go from Monday to Friday? They go to.....
- 50. Name the names of the children mentioned in the story....., and

YEMEN ENGLISH MEDIUM PRIMARY SCHOOL
HOLIDAY PACKAGE No 2

SOMO: KISWAHILI

JINA _____ TAREHE _____ DRS III

Muda: 1:30
Jibu maswali yote.

SEHEMU A:

Taja vitendawili vitano;

1.
2.
3.
4.
5.

SEHEMU B: CHAGUA JIBU SAHIHI

6. Niongezee sukari.....kwenye chai. []
a)vidogo b)vichache c)kidogo
7. Mtu anayetengeneza vifaa kwa mbao huitwa..... []
a)seremara b)mwashi c)mpishi
8. Maana ya nahau “vunjika moyo” ni..... []
a)kukata tamaa b)kukata roho c)kuaga dunia
9. Mwaka huu tutavuna mazao.....shambani kwetu []
a)madogo b)kidogo c)vidogo
10. Kupokea kitu kwa mikono miwili ni kuonyesha..... []
a)shukurani b)chuki c)kukataa
11. Wakati wa.....hatuji shule []
a)kufunga b)mafunzo c)likizo
12. Mvua hunyesha mlimani..... []
a)mwaka jana b)kila mara c)mwakani
13. Maana ya “kua macho” ni..... []
a)kukosa usingizi b)kuchungulia c)kuwa makini

14. "mama amesonga ugali" sentesi hii ipo katika wakati.....
 a)ujao b)uliopita mtimilifu c)uliopo []
15. Serikali.....ukiharibu mazingira []
 a)itakushitaki b)itakuhurumia c)itakshtaki

SEHEMU C: METHALI,VITENDAWILI NA NAHAU
Malizia methali zifuatazo:

16. Haba na haba.....
17. Ahadi ni.....
18. Ngoja ngoja.....
19. Mvumilivu.....
20. Siku za mwizi.....

Tegua vitendawili zifuatavyo

21. Mzungu kutoka ulaya na mkono kiunoni.....
22. Utupacho wewe kwake ni dhahabu.....
23. Kamba yangu ndefu lakin haifundg kuni.....
24. Watoto wa tajiri wa nguo hulala na kutembea uchi.....
25. Hesabu yake haina faida

Toa maana ya nahau zifuatazo

26. Ana cha mtema kuni.....
27. Kitinda mimba.....
28. Kumpa heko.....
29. Omba radhi.....
30. Ona haya.....

SEHEMU D:MATUMIZI YA LUGHA

Pigia mstari neno linaloonyesha ubora wa vitu kwa sifa

31. Mlio mkali unatokea pande gani?

- a) Mvua wala jua b) Baridi wala joto c) Maskini wala tajiri []
48. Pamoja na kuwa na majani mengi, boga hulala
- a) Chini b) Kitandani c) Kwenye majani []
49. Tajiri wa nguo katika habari hii ni
- a) Boga b) Mtoto c) Nanasi []
50. Zao la mmea wa boga ni
- a) Ua b) Mizizi c) Tunda []