



**SHORT BREAK SECOND PACKAGE**

**SUBJECT: NUMERACY.**

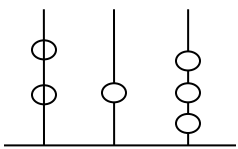
**GRADE TWO -MARCH, 2020**

**NAME..... STREAM..... DATE.....**

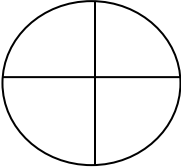

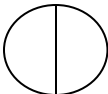
NO.	QUESTIONS	WORKING SPACE	ANSWER
1.	$421 + 213 =$		
2.	$21 + 43 =$		
3.	$\begin{array}{r} 66 \\ + 26 \\ \hline \\ \hline \end{array}$		
4.	$\begin{array}{r} 84 \\ + 211 \\ \hline \\ \hline \end{array}$		
5.	$\begin{array}{r} 436 \\ + 217 \\ \hline \\ \hline \end{array}$		
6.	Find the total of 500 and 200		
7.	$60 - 0 =$		


8.	$\begin{array}{r} 564 \\ - 231 \\ \hline \end{array}$		
9.	$\begin{array}{r} 400 \\ - 300 \\ \hline \end{array}$		
<b>NO.</b>	<b>QUESTIONS</b>	<b>WORKING SPACE</b>	<b>ANSWER</b>
10.	$\begin{array}{r} 70 \\ - 38 \\ \hline \end{array}$		
11.	Take away 200 from 521		
12.	$\begin{array}{r} 60 \\ - 12 \\ \hline \end{array}$		
<b>Expand the following number.</b>			
13.	476 = _____ + _____ + _____		
14.	612 = _____ + _____ + _____		
15.	44 = ___hundreds___ + tens___ ones		
16.	869 = ___hundreds ___tens ___ones.		

What number comes before, next and between?			
17.	97, 96, _____, 100, 101		
18.	18, 19, 20, _____		

NO.	QUESTIONS	WORKING SPACE	ANSWER
19.	10, 20, 30, _____		
20.	_____, 45, 46, 47.		
21.	Add 800 and 200.		
24.	<p><b>Arrange in ascending order</b></p> <p>a) 161    192    102    130</p> <p>    _____</p> <p>b) 678    781    452    214</p> <p>    _____</p>		
<b>Complete the following abacus.</b>			
25.	<p style="text-align: center;">H    T    O</p> 		

	_____											
26.	<table style="margin-left: auto; margin-right: auto; border-collapse: collapse;"> <tr> <td style="padding: 0 10px;">H</td> <td style="padding: 0 10px;">T</td> <td style="padding: 0 10px;">O</td> </tr> <tr> <td style="border-left: 1px solid black; border-right: 1px solid black; height: 40px;"></td> <td style="border-left: 1px solid black; border-right: 1px solid black; height: 40px;"></td> <td style="border-left: 1px solid black; border-right: 1px solid black; height: 40px;"></td> </tr> <tr> <td style="text-align: center; padding: 0 5px;">4</td> <td style="text-align: center; padding: 0 5px;">4</td> <td style="text-align: center; padding: 0 5px;">4</td> </tr> </table>	H	T	O				4	4	4		
H	T	O										
4	4	4										
<b>NO.</b>	<b>QUESTIONS</b>	<b>WORKING SPACE</b>	<b>ANSWER</b>									
	What is the place value of 5 in the following whole numbers?											
27.	356 = _____											
28.	85 = _____											
29.	520 = _____											
<b>Write the following number in words.</b>												
30.	500 = _____											
31.	22 = _____											
32.	175 = _____											
<b>Write the following number in figure.</b>												
33.	One hundred and thirty two =											
35.	Three hundred =											

36.	Forty seven =		
<b>What number has been expanded?</b>			
37.	$700 + 40 + 6 =$		
38.	$800 + 90 + 2 =$		
<b>NO.</b>	<b>QUESTIONS</b>	<b>WORKING SPACE</b>	<b>ANSWER</b>
39.	<p><b>Write the digit which is in tens.</b></p> <p>a) <math>458 = \underline{\quad}</math></p> <p>b) <math>263 = \underline{\quad}</math></p>		
<b>Shade the following fraction.</b>			
41.	 $\frac{1}{4}$		
42.	 $\frac{1}{3}$		
46.	<p>Name the following fractions.</p> <p>(i) <math>\frac{1}{2} =</math></p> <p>(ii) <math>\frac{1}{4} =</math></p>		
<b>What is the fraction of the shaded part?</b>			
47.			

48.			
49.	<p><b>Put the correct sign &lt; &gt; or =</b></p> <p>a) 709 ___ 907</p> <p>b) 50 ___ 05</p> <p>c) 800 ___ 700</p>		
50.	<p><b>Circle the smallest number</b></p> <p>a) 159 245 097 340</p> <p>b) 500 567 230 102</p>		